



EJERCICIO DE RESTA




Four bunches of blueberries (each with 3 berries) minus one bunch of blueberries (with 3 berries) equals a dotted line for the answer.

$$4 \times 3 - 1 \times 3 = \dots\dots\dots$$



Two rows of four pineapples each (total 8) minus three pineapples (two in a row and one below) equals a dotted line for the answer.

$$8 - 3 = \dots\dots\dots$$




Two columns of three apples each (total 6) minus four apples (two in a column and two in a row below) equals a dotted line for the answer.

$$6 - 4 = \dots\dots\dots$$



Two rows of three pears each (total 6) minus five pears (three in a row and two below) equals a dotted line for the answer.

$$6 - 5 = \dots\dots\dots$$



Two rows of four strawberries each (total 8) minus five strawberries (three in a row and two below) equals a dotted line for the answer.

$$8 - 5 = \dots\dots\dots$$

Más recursos en:
www.webdelmaestro.com