

# SUMAS Y RESTAS

para **PRIMERO**

Cuaderno 1

$7 - 3$

40

62

1

8

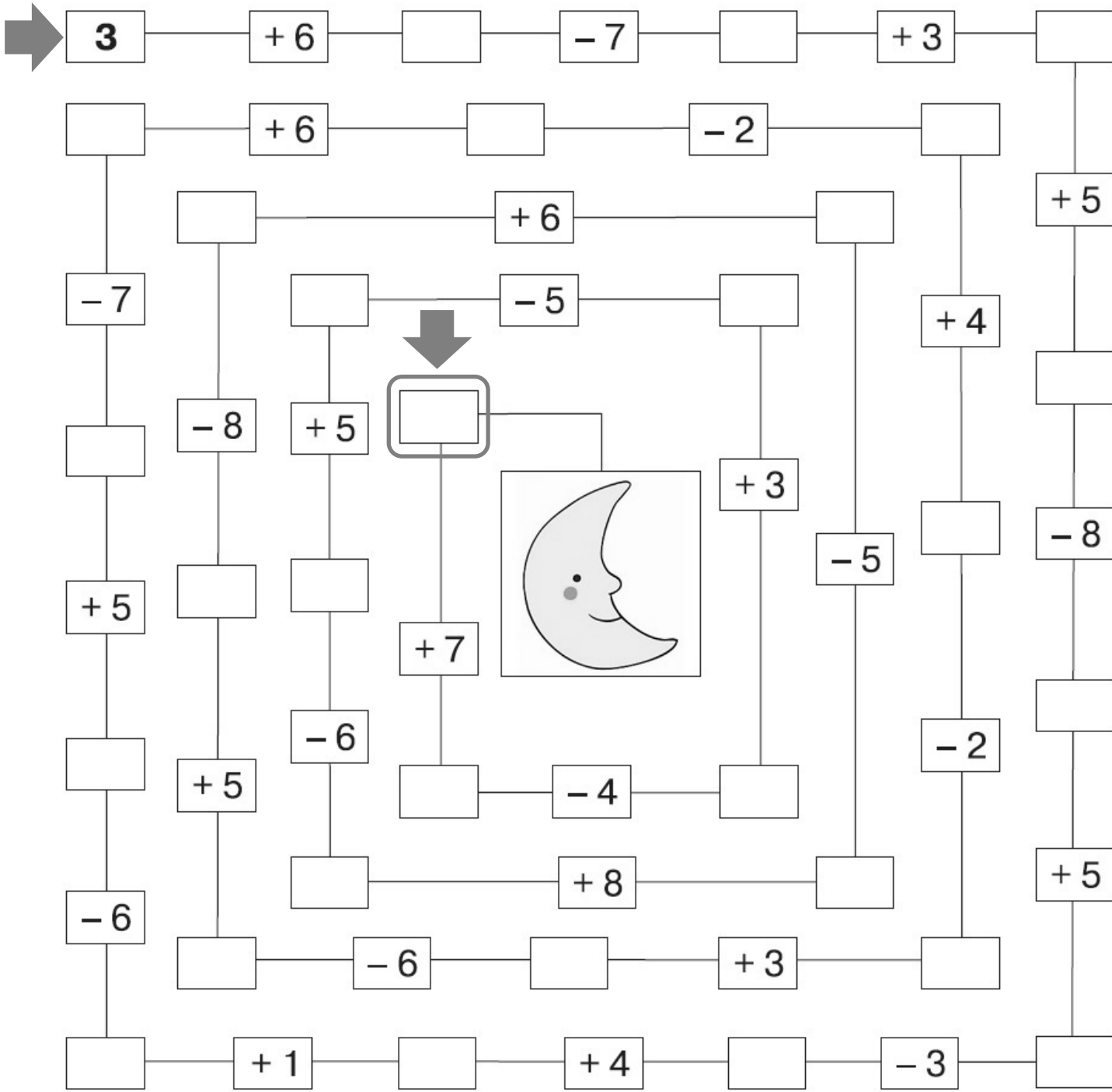

9

5

$6 + 4$




Calcula cuantos días tardará el cohete en llegar a la Luna.



¿Cuáles de estos vehículos podrán entrar en una cochera?  
Resuelve las operaciones y tendrás la clave.



$4 + 4 = \square$



$10 - 7 = \square$



$3 + 3 = \square$

$3 + 4 = \square$

$6 - 5 = \square$

$8 - 6 = \square$

$1 + 8 = \square$

$7 - 2 = \square$

$2 + 2 = \square$

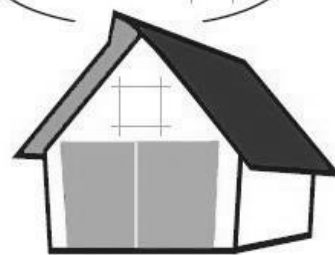
$9 - 6 = \square$

$5 + 5 = \square$

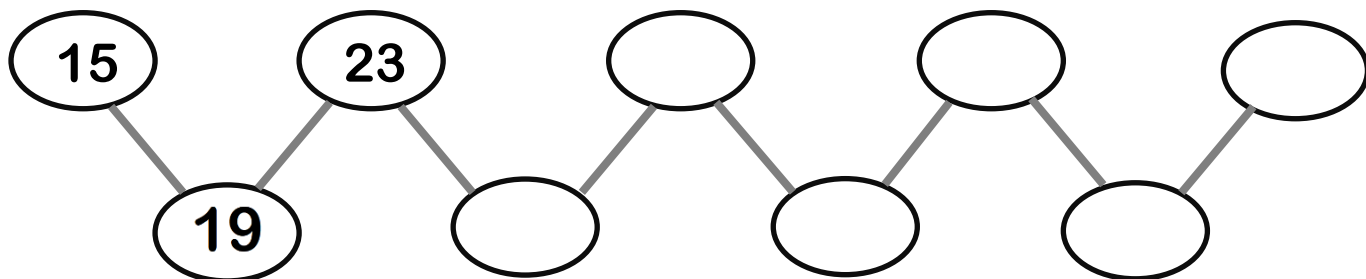
$3 + 5 = \square$

$4 + 2 = \square$

$10 - 3 = \square$




Completa la serie.



NOMBRE: \_\_\_\_\_

FECHA: \_\_\_\_\_

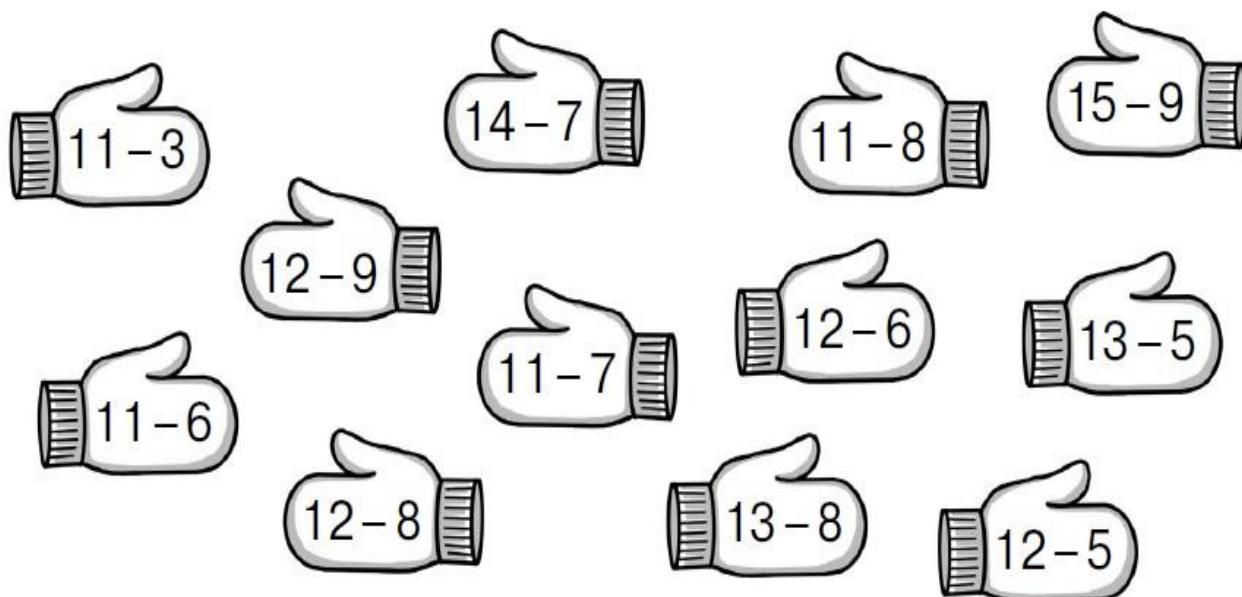
Suma y resta.



$2 + 5 =$	$3 + 7 =$	$7 - 4 =$	$2 + 7 =$	$6 + 4 =$
$9 - 4 =$	$2 + 6 =$	$4 + 5 =$	$8 - 3 =$	$7 - 3 =$
$7 + 2 =$	$9 - 8 =$	$7 - 5 =$	$4 + 3 =$	$3 + 6 =$
$9 - 6 =$	$7 + 3 =$	$3 + 4 =$	$6 - 3 =$	$8 - 4 =$
$4 + 4 =$	$10 - 6 =$	$6 - 4 =$	$5 + 2 =$	$2 + 5 =$
$10 - 5 =$	$8 + 2 =$	$10 - 7 =$	$7 - 6 =$	$4 + 7 =$

$8 + 2 =$	$7 + 3 =$	$5 + 4 =$	$3 + 3 =$	$7 + 2 =$
$7 + 2 =$	$6 - 3 =$	$6 + 4 =$	$5 + 4 =$	$6 - 1 =$
$5 - 2 =$	$3 + 4 =$	$10 - 4 =$	$7 - 1 =$	$4 + 4 =$
$2 + 5 =$	$9 - 3 =$	$4 + 5 =$	$6 + 2 =$	$5 - 2 =$
$8 - 2 =$	$5 + 3 =$	$5 + 5 =$	$4 - 2 =$	$1 + 8 =$
$2 + 3 =$	$3 + 6 =$	$4 + 6 =$	$2 + 7 =$	$8 - 2 =$

Resuelve y colorea del mismo color los guantes con igual resultado.



NOMBRE: \_\_\_\_\_

FECHA: \_\_\_\_\_

Suma.

$$\begin{array}{r} 22 \\ + 64 \\ \hline \end{array}$$

$$\begin{array}{r} 21 \\ + 21 \\ \hline \end{array}$$

$$\begin{array}{r} 12 \\ + 14 \\ \hline \end{array}$$

$$\begin{array}{r} 23 \\ + 53 \\ \hline \end{array}$$

$$\begin{array}{r} 2 \\ + 77 \\ \hline \end{array}$$

$$\begin{array}{r} 42 \\ + 61 \\ \hline \end{array}$$

$$\begin{array}{r} 23 \\ + 51 \\ \hline \end{array}$$

$$\begin{array}{r} 1 \\ + 11 \\ \hline \end{array}$$

$$\begin{array}{r} 2 \\ + 70 \\ \hline \end{array}$$

$$\begin{array}{r} 2 \\ + 3 \\ \hline \end{array}$$

$$\begin{array}{r} 2 \\ + 92 \\ \hline \end{array}$$

$$\begin{array}{r} 95 \\ + 32 \\ \hline \end{array}$$

$$\begin{array}{r} 12 \\ + 7 \\ \hline \end{array}$$

$$\begin{array}{r} 14 \\ + 22 \\ \hline \end{array}$$

$$\begin{array}{r} 21 \\ + 93 \\ \hline \end{array}$$

$$\begin{array}{r} 14 \\ + 34 \\ \hline \end{array}$$

$$\begin{array}{r} 2 \\ + 41 \\ \hline \end{array}$$

$$\begin{array}{r} 15 \\ + 81 \\ \hline \end{array}$$

$$\begin{array}{r} 12 \\ + 21 \\ \hline \end{array}$$

$$\begin{array}{r} 1 \\ + 41 \\ \hline \end{array}$$

$$\begin{array}{r} 62 \\ + 64 \\ \hline \end{array}$$

$$\begin{array}{r} 22 \\ + 91 \\ \hline \end{array}$$

$$\begin{array}{r} 11 \\ + 11 \\ \hline \end{array}$$

$$\begin{array}{r} 15 \\ + 14 \\ \hline \end{array}$$

$$\begin{array}{r} 17 \\ + 82 \\ \hline \end{array}$$





$$\begin{array}{r} 25 \\ + 81 \\ \hline \end{array}$$

$$\begin{array}{r} 1 \\ + 51 \\ \hline \end{array}$$

$$\begin{array}{r} 22 \\ + 65 \\ \hline \end{array}$$

$$\begin{array}{r} 11 \\ + 81 \\ \hline \end{array}$$

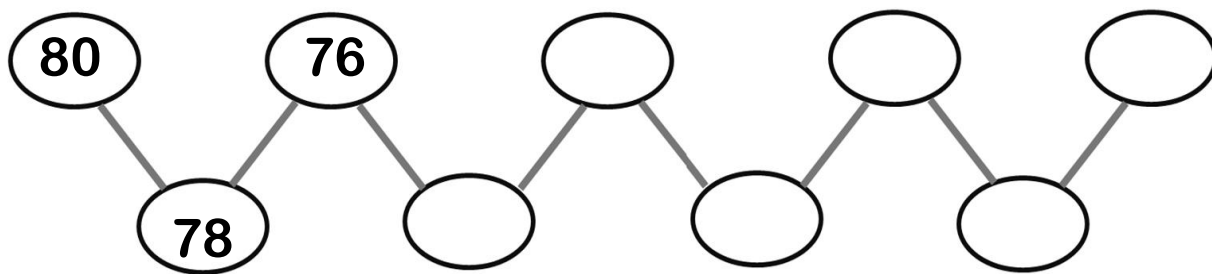
$$\begin{array}{r} 27 \\ + 71 \\ \hline \end{array}$$



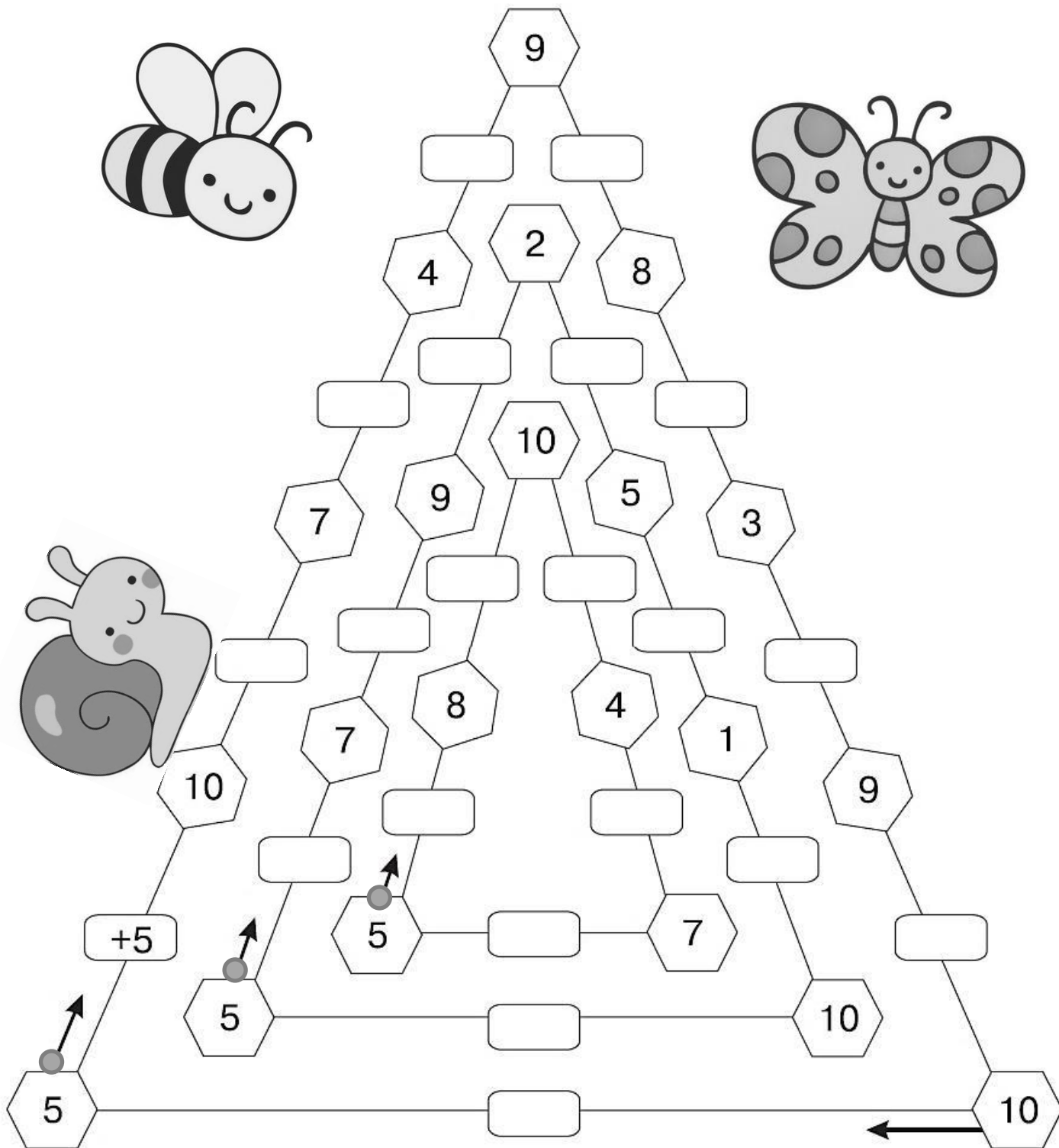
NOMBRE: \_\_\_\_\_

FECHA: \_\_\_\_\_

Completa la serie.



Escribe las operaciones. Empieza donde indican las flechas.






NOMBRE: \_\_\_\_\_

FECHA: \_\_\_\_\_

Resuelve las restas.



$$\begin{array}{r} 57 \\ - 22 \\ \hline \end{array} \quad \begin{array}{r} 56 \\ - 36 \\ \hline \end{array} \quad \begin{array}{r} 88 \\ - 41 \\ \hline \end{array} \quad \begin{array}{r} 49 \\ - 10 \\ \hline \end{array} \quad \begin{array}{r} 65 \\ - 22 \\ \hline \end{array} \quad \begin{array}{r} 87 \\ - 14 \\ \hline \end{array} \quad \begin{array}{r} 87 \\ - 22 \\ \hline \end{array}$$

$$\begin{array}{r} 65 \\ - 41 \\ \hline \end{array} \quad \begin{array}{r} 69 \\ - 30 \\ \hline \end{array} \quad \begin{array}{r} 77 \\ - 43 \\ \hline \end{array} \quad \begin{array}{r} 87 \\ - 23 \\ \hline \end{array} \quad \begin{array}{r} 87 \\ - 64 \\ \hline \end{array} \quad \begin{array}{r} 71 \\ - 10 \\ \hline \end{array} \quad \begin{array}{r} 65 \\ - 25 \\ \hline \end{array}$$

$$\begin{array}{r} 34 \\ - 20 \\ \hline \end{array} \quad \begin{array}{r} 93 \\ - 11 \\ \hline \end{array} \quad \begin{array}{r} 99 \\ - 15 \\ \hline \end{array} \quad \begin{array}{r} 89 \\ - 10 \\ \hline \end{array} \quad \begin{array}{r} 77 \\ - 30 \\ \hline \end{array} \quad \begin{array}{r} 85 \\ - 11 \\ \hline \end{array} \quad \begin{array}{r} 39 \\ - 10 \\ \hline \end{array}$$

$$\begin{array}{r} 98 \\ - 14 \\ \hline \end{array} \quad \begin{array}{r} 70 \\ - 20 \\ \hline \end{array} \quad \begin{array}{r} 59 \\ - 23 \\ \hline \end{array} \quad \begin{array}{r} 56 \\ - 35 \\ \hline \end{array} \quad \begin{array}{r} 45 \\ - 12 \\ \hline \end{array} \quad \begin{array}{r} 58 \\ - 20 \\ \hline \end{array} \quad \begin{array}{r} 88 \\ - 12 \\ \hline \end{array}$$

Resuelve y ordena los resultados de menor a mayor. Escribe en el recuadro de abajo la letra correspondiente y lee el mensaje.

$$\boxed{7} \xrightarrow{+4} \bigcirc \xrightarrow{-8} \bigcirc \xrightarrow{+9} \bigcirc \xrightarrow{-10} \boxed{\phantom{00}} \text{ B}$$

$$\boxed{16} \xrightarrow{-8} \bigcirc \xrightarrow{+5} \bigcirc \xrightarrow{-7} \bigcirc \xrightarrow{+9} \boxed{\phantom{00}} \text{ N}$$

$$\boxed{4} \xrightarrow{+8} \bigcirc \xrightarrow{-6} \bigcirc \xrightarrow{+9} \bigcirc \xrightarrow{-5} \boxed{\phantom{00}} \text{ I}$$


$$\boxed{11} \xrightarrow{-6} \bigcirc \xrightarrow{+9} \bigcirc \xrightarrow{-6} \bigcirc \xrightarrow{+3} \boxed{\phantom{00}} \text{ E}$$




NOMBRE: \_\_\_\_\_

FECHA: \_\_\_\_\_

- 1) Resuelve empezando por las flechas.
- 2) Suma las cantidades que se indican.



● 1)

→	↓	7	-	1	=		+		=	9
		-		+		-		+		-
→			+	2	=	4	-		=	3
		=		=		=		=		=
→		5	-		=	2	+		=	
		+		-		+		+		-
→		4	+		=		-	2	=	4
		=		=		=		=		=
→			-	1	=		-	6	=	

● 2)

+ 3

44 →

25 →

61 →

76 →

- 5

69 →

85 →

97 →

78 →

→	↓	8	-	5	=		+		=	8
		-		+		+		-		-
→			-	1	=	5	-		=	1
		=		=		=		=		=
→		2	+		=	8	-		=	
		+		-		-		+		+
→		4	+		=		-	5	=	1
		=		=		=		=		=
→			-	4	=		+	6	=	

+ 30

44 →

25 →

61 →

76 →

- 50

69 →

85 →

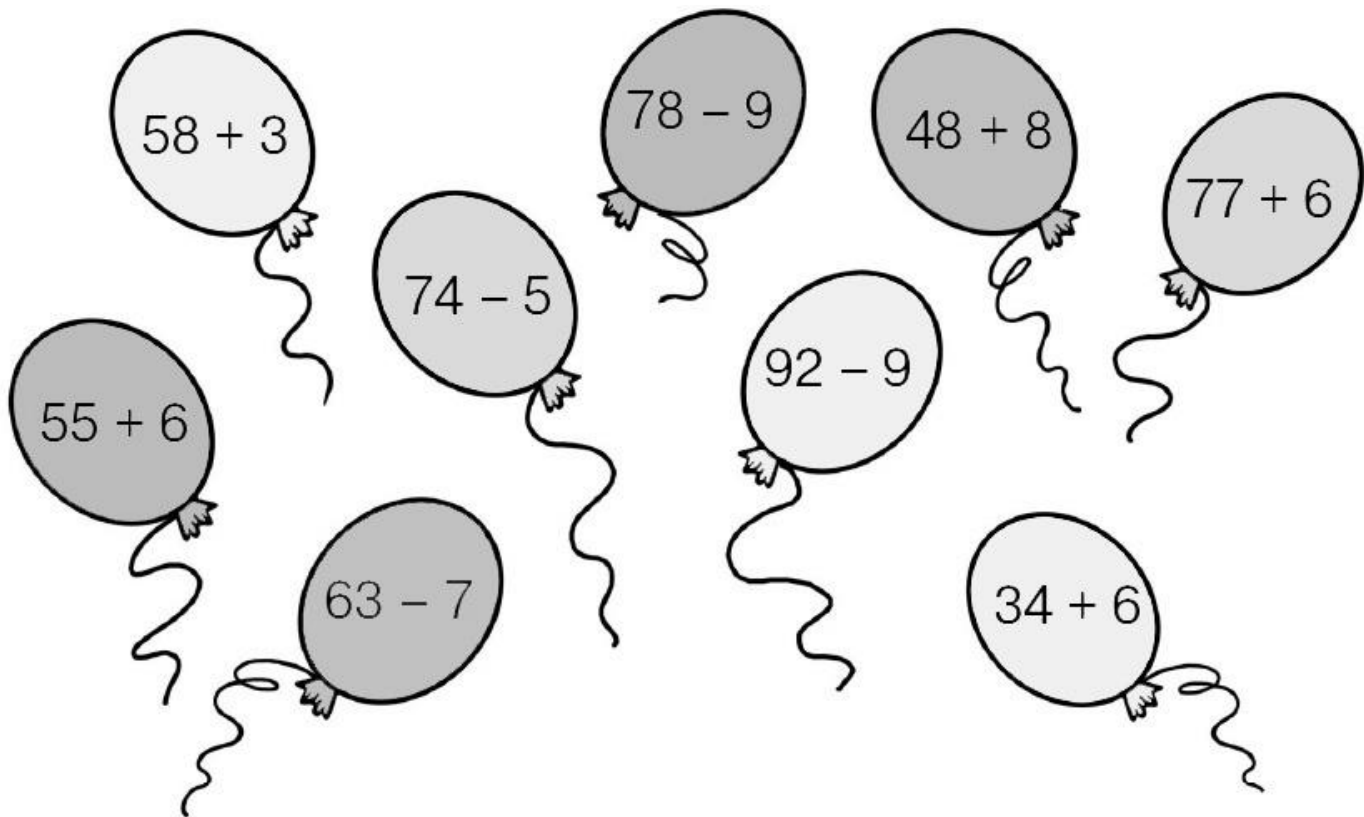
97 →

78 →



¿De quién es cada globo?

Relaciona cada operación con su resultado.



Escribe las operaciones.

5	<input type="text" value="+2"/>	▶	7	<input type="text"/>	▶	8	<input type="text"/>	▶	10	<input type="text"/>	▶	11	<input type="text"/>	▶	13
12	<input type="text" value="+1"/>	▶	13	<input type="text"/>	▶	15	<input type="text"/>	▶	17	<input type="text"/>	▶	18	<input type="text"/>	▶	20
23	<input type="text" value="+5"/>	▶	28	<input type="text"/>	▶	32	<input type="text"/>	▶	36	<input type="text"/>	▶	41	<input type="text"/>	▶	45
34	<input type="text" value="+6"/>	▶	40	<input type="text"/>	▶	45	<input type="text"/>	▶	51	<input type="text"/>	▶	55	<input type="text"/>	▶	60

NOMBRE: \_\_\_\_\_

FECHA: \_\_\_\_\_

En esta tabla existen muchos errores. Pinta de amarillo las casillas erróneas.



$12 - 6 = 6$	$5 + 7 = 11$	$15 - 7 = 8$	$18 - 9 = 8$	$9 + 8 = 17$	$13 - 6 = 8$
$13 - 8 = 6$	$8 + 8 = 16$	$17 - 8 = 8$	$11 - 3 = 8$	$2 + 9 = 10$	$15 - 9 = 6$
$7 + 7 = 14$	$6 + 6 = 13$	$4 + 7 = 11$	$12 - 5 = 6$	$8 + 4 = 12$	$17 - 9 = 9$
$4 + 8 = 11$	$15 - 6 = 8$	$14 - 7 = 8$	$17 - 7 = 9$	$16 - 8 = 9$	$8 + 6 = 13$
$8 + 9 = 18$	$8 + 3 = 10$	$16 - 7 = 9$	$5 + 9 = 14$	$8 + 6 = 13$	$18 - 8 = 9$
$7 + 6 = 12$	$6 + 8 = 14$	$4 + 9 = 14$	$14 - 6 = 7$	$14 - 8 = 6$	$11 - 2 = 7$
$5 + 6 = 11$	$12 - 4 = 7$	$9 + 7 = 17$	$14 - 7 = 6$	$14 - 5 = 8$	$8 + 5 = 13$
$3 + 8 = 12$	$6 + 9 = 15$	$9 + 4 = 15$	$11 - 5 = 7$	$11 - 7 = 4$	$4 + 9 = 16$
$9 + 3 = 13$	$6 + 8 = 13$	$12 - 8 = 4$	$8 + 7 = 15$	$15 - 8 = 6$	$9 + 8 = 18$
$7 + 8 = 14$	$8 + 4 = 11$	$6 + 7 = 14$	$11 - 8 = 4$	$5 + 8 = 15$	$17 - 9 = 6$

Calcula.

$36 + 4 + 2 = \square$

$54 - 4 - 6 = \square$

$22 + 8 + 1 = \square$

$85 + 5 + 7 = \square$

$68 - 8 - 3 = \square$

$55 - 5 - 9 = \square$

$41 + 9 + 6 = \square$

$33 - 3 - 5 = \square$

$34 + 6 + 6 = \square$

$67 + 7 + 4 = \square$




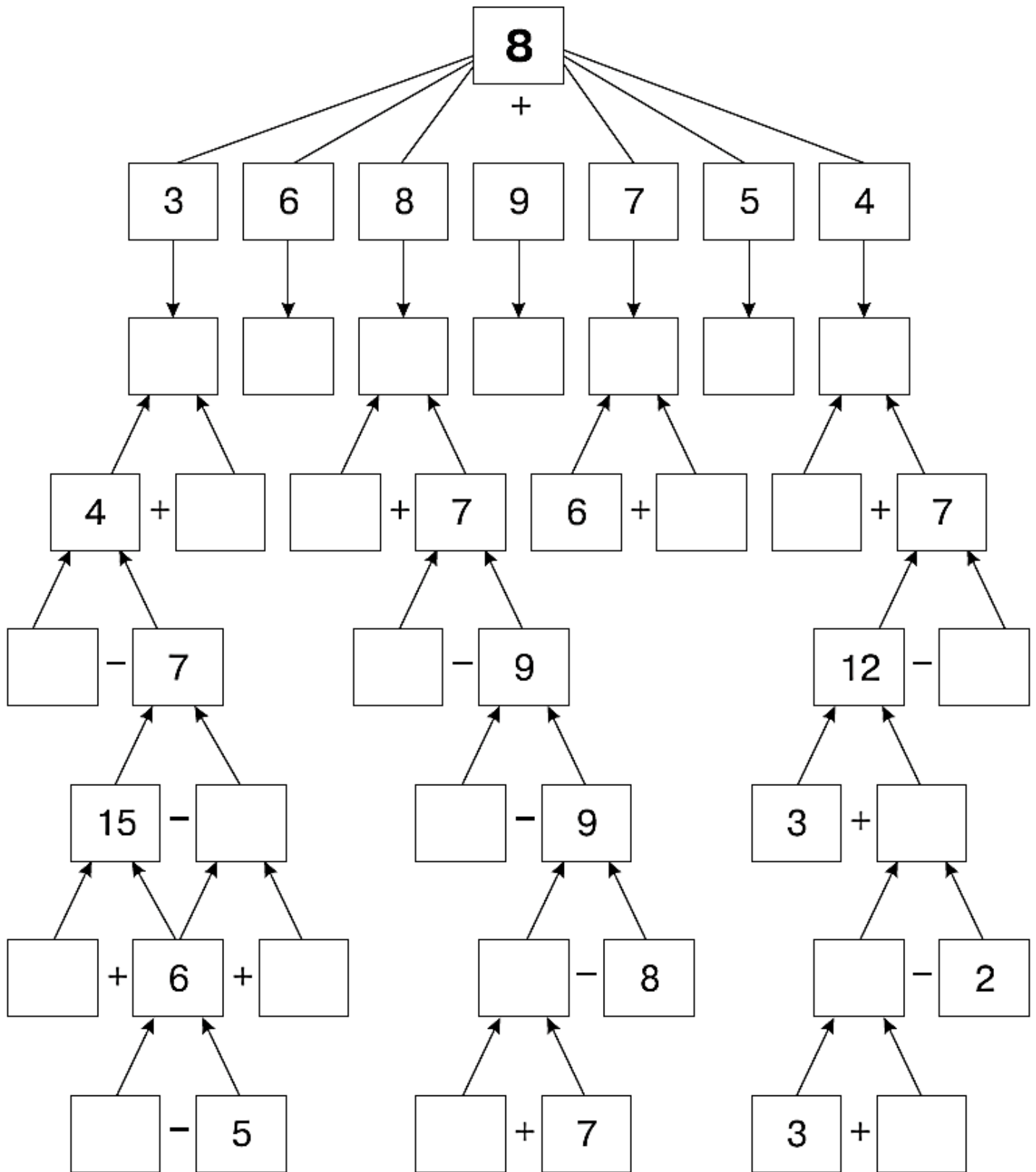
$77 - 7 - 1 = \square$

$48 - 8 - 8 = \square$

NOMBRE: \_\_\_\_\_

FECHA: \_\_\_\_\_

Calcula y escribe los resultados.



NOMBRE: \_\_\_\_\_ FECHA: \_\_\_\_\_

Resuelve. Une los resultados que coincidan con su casa correspondiente.

$$\begin{array}{r} - 53 \\ \underline{31} \end{array}$$

$$\begin{array}{r} - 69 \\ \underline{44} \end{array}$$

$$\begin{array}{r} + 21 \\ \underline{17} \end{array}$$

$$\begin{array}{r} - 99 \\ \underline{75} \end{array}$$

$$\begin{array}{r} + 53 \\ \underline{37} \end{array}$$

$$\begin{array}{r} - 78 \\ \underline{62} \end{array}$$

$$\begin{array}{r} - 89 \\ \underline{43} \end{array}$$

$$\begin{array}{r} + 32 \\ \underline{57} \end{array}$$

$$\begin{array}{r} + 10 \\ \underline{80} \end{array}$$

$$\begin{array}{r} - 58 \\ \underline{32} \end{array}$$



Escribe el número que falta.

$35 + \square = 40$

$82 - \square = 80$

$57 + \square = 60$

$42 + \square = 50$

$37 - \square = 30$

$79 - \square = 70$

$66 + \square = 70$

$61 - \square = 60$

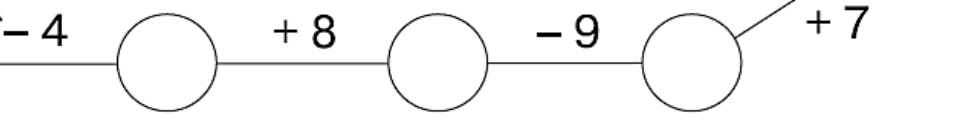
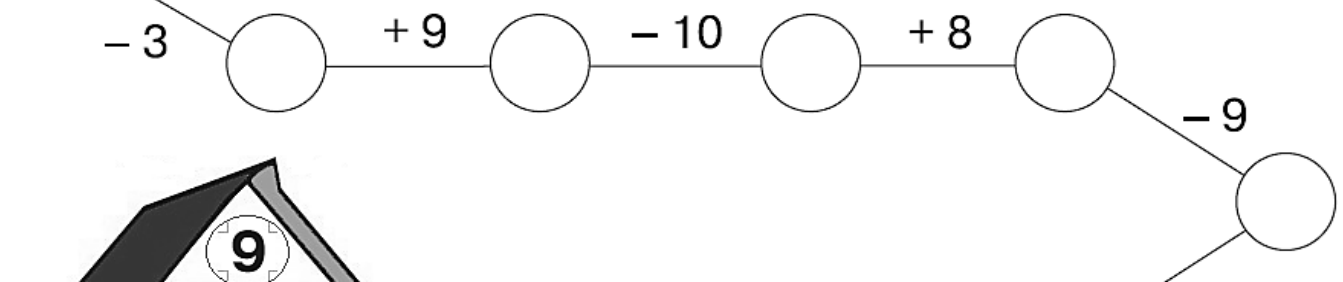
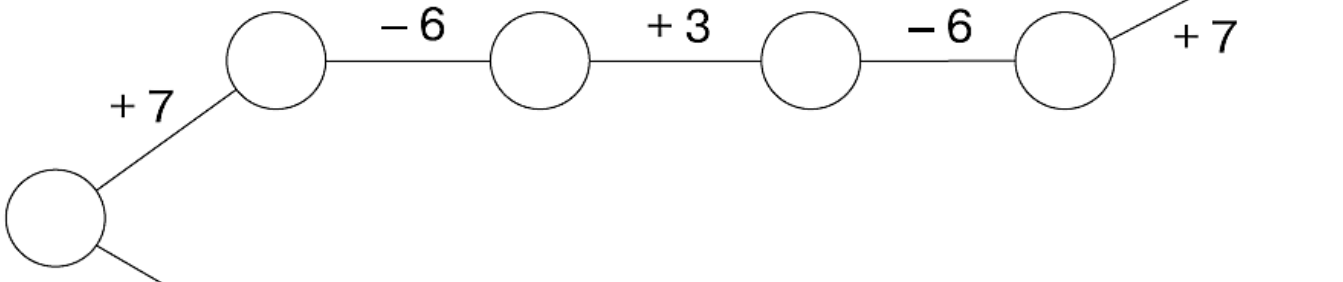
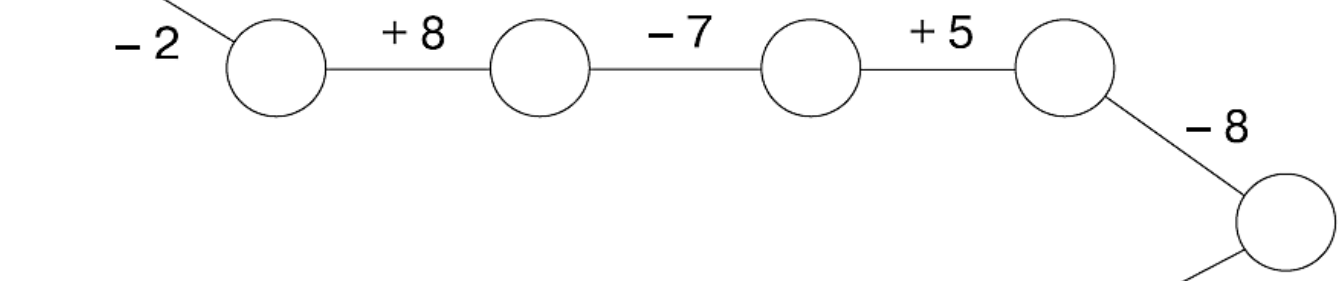
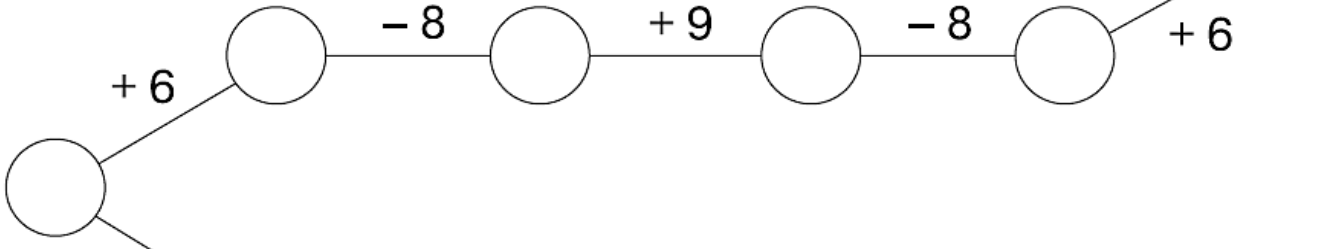
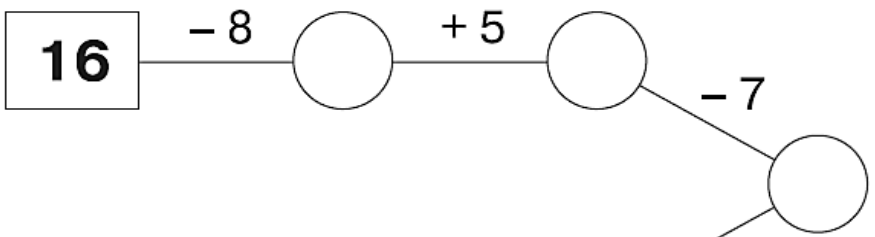

$43 + \square = 50$

$24 + \square = 30$

$24 - \square = 20$

$96 - \square = 90$

Realiza las operaciones.



Resuelve.

$38 - 4 = \square$    
  $43 + 6 = \square$    
  $92 - 40 = \square$    
  $51 + 5 = \square$   
 $90 - 60 = \square$    
  $35 + 30 = \square$    
  $42 - 10 = \square$    
  $64 + 20 = \square$



NOMBRE: \_\_\_\_\_

FECHA: \_\_\_\_\_

Suma.

$$\begin{array}{r} 95 \\ + 31 \\ \hline \end{array}$$

$$\begin{array}{r} 71 \\ + 21 \\ \hline \end{array}$$

$$\begin{array}{r} 47 \\ + 71 \\ \hline \end{array}$$

$$\begin{array}{r} 17 \\ + 61 \\ \hline \end{array}$$

$$\begin{array}{r} 28 \\ + 91 \\ \hline \end{array}$$

Une cada ardilla con su bellota y con el árbol donde vive.



$9 + 7$



$5 + 9$




$4 + 8$




$6 + 7$




$9 + 2$




$13$



$11$



$16$




$12$



$14$




$6 + 5$




$7 + 7$



$8 + 8$



$4 + 9$



$5 + 7$