

SOLUCIONARIO

SUMAS Y RESTAS

para **PRIMERO**

Cuaderno 1

$7 - 3$

40

62

1

8

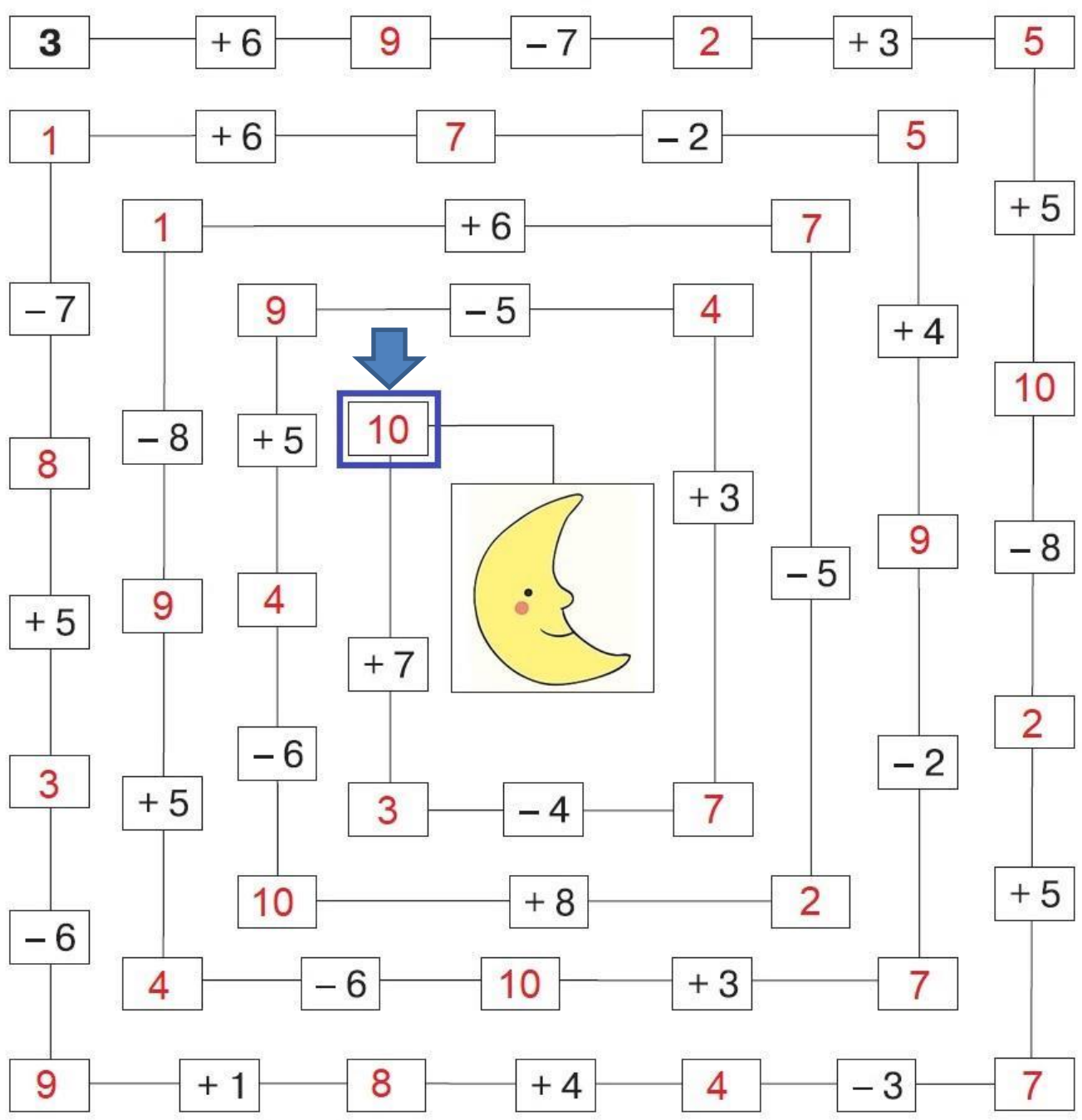

9

5

$6 + 4$



Calcula cuantos días tardará el cohete en llegar a la Luna.



¿Cuáles de estos vehículos podrán entrar en una cochera?
Resuelve las operaciones y tendrás la clave.

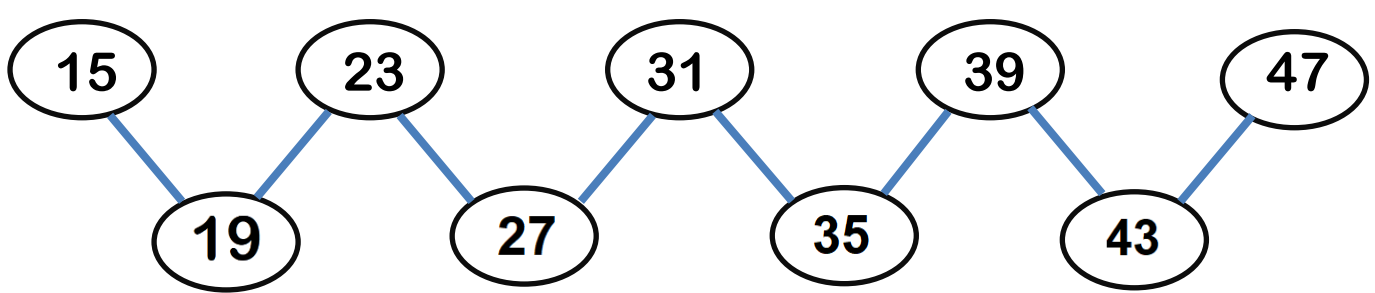
$4 + 4 = 8$
 $3 + 4 = 7$
 $1 + 8 = 9$
 $9 - 6 = 3$
 $3 + 5 = 8$

$10 - 7 = 3$
 $6 - 5 = 1$
 $7 - 2 = 5$
 $4 + 2 = 6$

$3 + 3 = 6$
 $8 - 6 = 2$
 $2 + 2 = 4$
 $5 + 5 = 10$
 $10 - 3 = 7$

Garage 1: 8
 Garage 2: 6
 Garage 3: 7


Completa la serie.



NOMBRE: _____

FECHA: _____

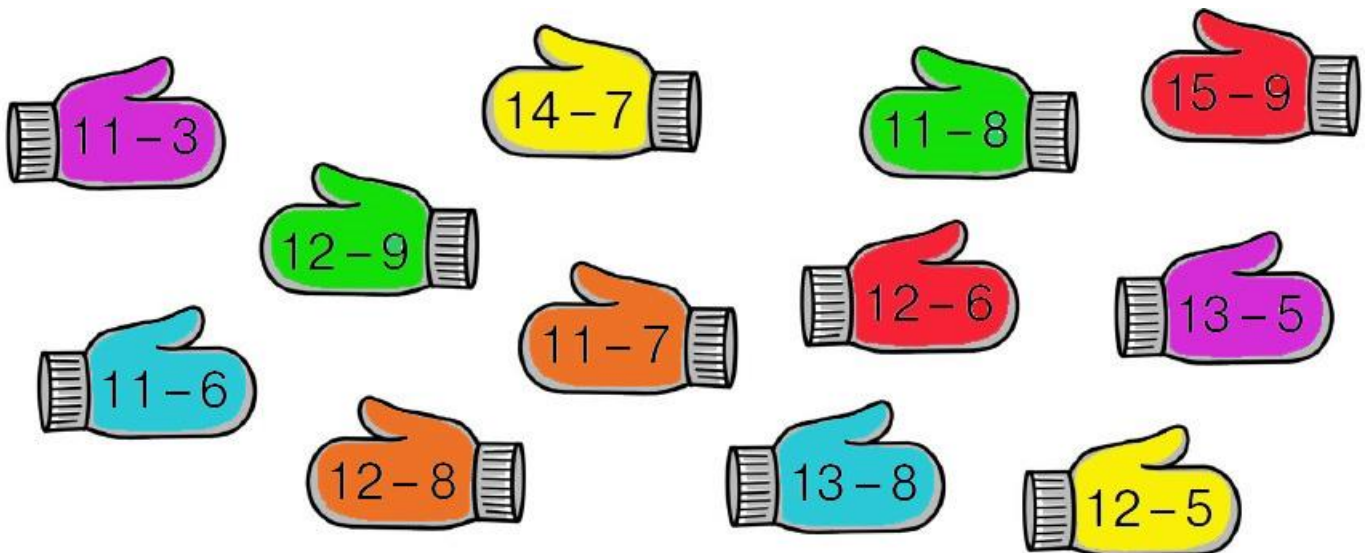
Suma y resta.



$2 + 5 = 7$	$3 + 7 = 10$	$7 - 4 = 3$	$2 + 7 = 9$	$6 + 4 = 10$
$9 - 4 = 5$	$2 + 6 = 8$	$4 + 5 = 9$	$8 - 3 = 5$	$7 - 3 = 4$
$7 + 2 = 9$	$9 - 8 = 1$	$7 - 5 = 2$	$4 + 3 = 7$	$3 + 6 = 9$
$9 - 6 = 3$	$7 + 3 = 10$	$3 + 4 = 7$	$6 - 3 = 3$	$8 - 4 = 4$
$4 + 4 = 8$	$10 - 6 = 4$	$6 - 4 = 2$	$5 + 2 = 7$	$2 + 5 = 7$
$10 - 5 = 5$	$8 + 2 = 10$	$10 - 7 = 3$	$7 - 6 = 1$	$4 + 7 = 11$

$8 + 2 = 10$	$7 + 3 = 10$	$5 + 4 = 9$	$3 + 3 = 6$	$7 + 2 = 9$
$7 + 2 = 9$	$6 - 3 = 3$	$6 + 4 = 10$	$5 + 4 = 9$	$6 - 1 = 5$
$5 - 2 = 3$	$3 + 4 = 7$	$10 - 4 = 6$	$7 - 1 = 6$	$4 + 4 = 8$
$2 + 5 = 7$	$9 - 3 = 6$	$4 + 5 = 9$	$6 + 2 = 8$	$5 - 2 = 3$
$8 - 2 = 6$	$5 + 3 = 8$	$5 + 5 = 10$	$4 - 2 = 2$	$1 + 8 = 9$
$2 + 3 = 5$	$3 + 6 = 9$	$4 + 6 = 10$	$2 + 7 = 9$	$8 - 2 = 6$

Resuelve y colorea del mismo color los guantes con igual resultado.



NOMBRE: _____

FECHA: _____

Suma.

$$\begin{array}{r} 22 \\ + 64 \\ \hline 86 \end{array}$$

$$\begin{array}{r} 21 \\ + 21 \\ \hline 42 \end{array}$$

$$\begin{array}{r} 12 \\ + 14 \\ \hline 26 \end{array}$$

$$\begin{array}{r} 23 \\ + 53 \\ \hline 76 \end{array}$$

$$\begin{array}{r} 2 \\ + 77 \\ \hline 79 \end{array}$$

$$\begin{array}{r} 42 \\ + 61 \\ \hline 103 \end{array}$$

$$\begin{array}{r} 23 \\ + 51 \\ \hline 74 \end{array}$$

$$\begin{array}{r} 1 \\ + 11 \\ \hline 12 \end{array}$$

$$\begin{array}{r} 2 \\ + 70 \\ \hline 72 \end{array}$$

$$\begin{array}{r} 2 \\ + 3 \\ \hline 5 \end{array}$$

$$\begin{array}{r} 2 \\ + 92 \\ \hline 94 \end{array}$$

$$\begin{array}{r} 95 \\ + 32 \\ \hline 127 \end{array}$$

$$\begin{array}{r} 12 \\ + 7 \\ \hline 19 \end{array}$$

$$\begin{array}{r} 14 \\ + 22 \\ \hline 36 \end{array}$$

$$\begin{array}{r} 21 \\ + 93 \\ \hline 114 \end{array}$$

$$\begin{array}{r} 14 \\ + 34 \\ \hline 48 \end{array}$$

$$\begin{array}{r} 2 \\ + 41 \\ \hline 43 \end{array}$$

$$\begin{array}{r} 15 \\ + 81 \\ \hline 96 \end{array}$$

$$\begin{array}{r} 12 \\ + 21 \\ \hline 33 \end{array}$$

$$\begin{array}{r} 1 \\ + 41 \\ \hline 42 \end{array}$$

$$\begin{array}{r} 62 \\ + 64 \\ \hline 126 \end{array}$$

$$\begin{array}{r} 22 \\ + 91 \\ \hline 113 \end{array}$$

$$\begin{array}{r} 11 \\ + 11 \\ \hline 22 \end{array}$$

$$\begin{array}{r} 15 \\ + 14 \\ \hline 29 \end{array}$$

$$\begin{array}{r} 17 \\ + 82 \\ \hline 99 \end{array}$$




$$\begin{array}{r} 25 \\ + 81 \\ \hline 106 \end{array}$$

$$\begin{array}{r} 1 \\ + 51 \\ \hline 52 \end{array}$$

$$\begin{array}{r} 22 \\ + 65 \\ \hline 87 \end{array}$$

$$\begin{array}{r} 11 \\ + 81 \\ \hline 92 \end{array}$$

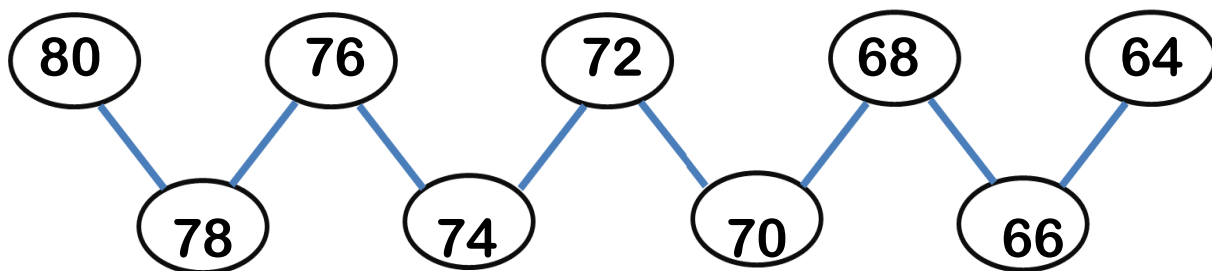
$$\begin{array}{r} 27 \\ + 71 \\ \hline 98 \end{array}$$



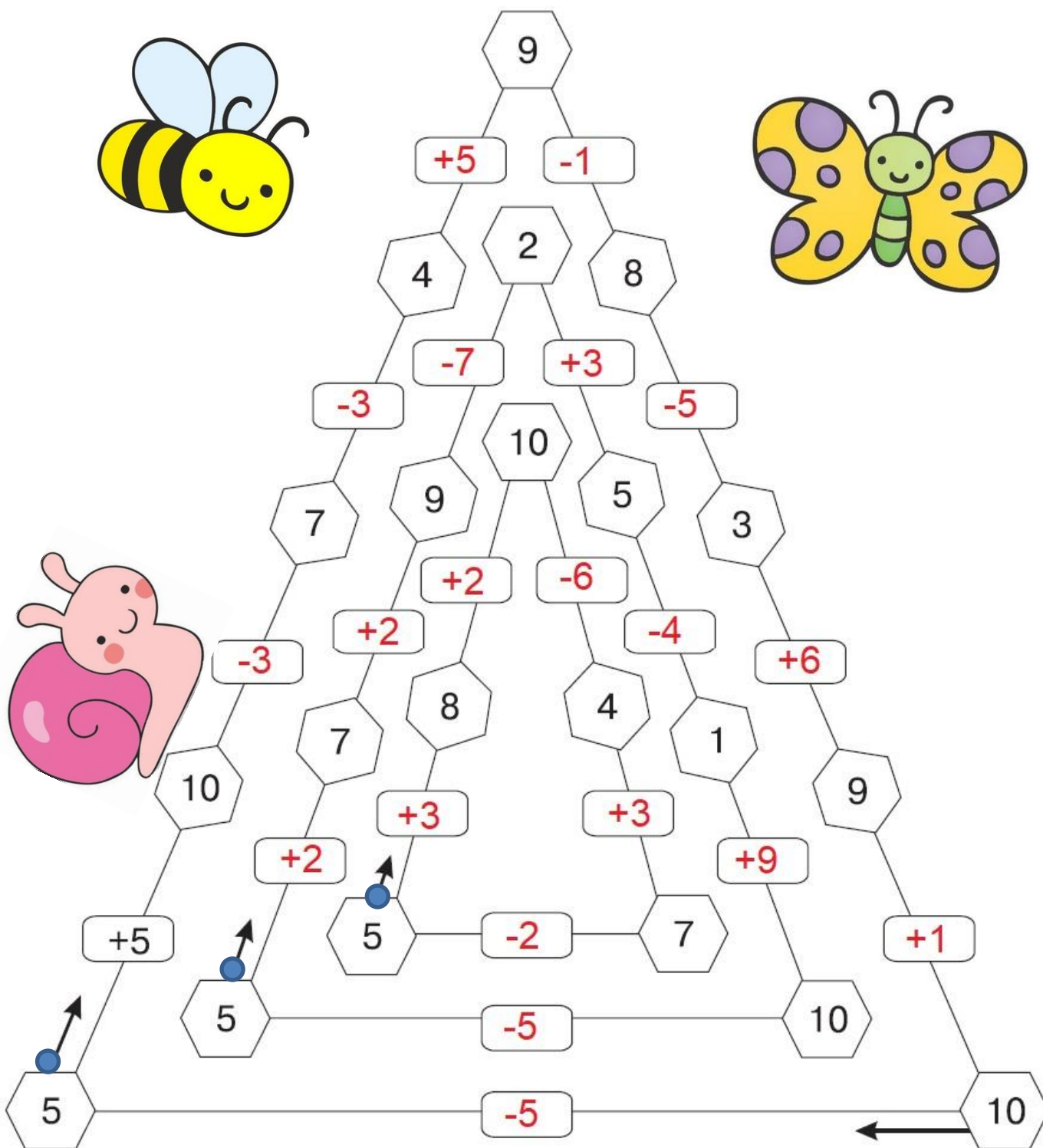
NOMBRE: _____

FECHA: _____

Completa la serie.




Escribe las operaciones. Empieza donde indican las flechas.



NOMBRE: _____

FECHA: _____

Resuelve las restas.



$\begin{array}{r} 57 \\ - 22 \\ \hline 35 \end{array}$	$\begin{array}{r} 56 \\ - 36 \\ \hline 20 \end{array}$	$\begin{array}{r} 88 \\ - 41 \\ \hline 47 \end{array}$	$\begin{array}{r} 49 \\ - 10 \\ \hline 39 \end{array}$	$\begin{array}{r} 65 \\ - 22 \\ \hline 43 \end{array}$	$\begin{array}{r} 87 \\ - 14 \\ \hline 73 \end{array}$	$\begin{array}{r} 87 \\ - 22 \\ \hline 65 \end{array}$
$\begin{array}{r} 65 \\ - 41 \\ \hline 24 \end{array}$	$\begin{array}{r} 69 \\ - 30 \\ \hline 39 \end{array}$	$\begin{array}{r} 77 \\ - 43 \\ \hline 34 \end{array}$	$\begin{array}{r} 87 \\ - 23 \\ \hline 64 \end{array}$	$\begin{array}{r} 87 \\ - 64 \\ \hline 23 \end{array}$	$\begin{array}{r} 71 \\ - 10 \\ \hline 61 \end{array}$	$\begin{array}{r} 65 \\ - 25 \\ \hline 40 \end{array}$
$\begin{array}{r} 34 \\ - 20 \\ \hline 14 \end{array}$	$\begin{array}{r} 93 \\ - 11 \\ \hline 82 \end{array}$	$\begin{array}{r} 99 \\ - 15 \\ \hline 84 \end{array}$	$\begin{array}{r} 89 \\ - 10 \\ \hline 79 \end{array}$	$\begin{array}{r} 77 \\ - 30 \\ \hline 47 \end{array}$	$\begin{array}{r} 85 \\ - 11 \\ \hline 74 \end{array}$	$\begin{array}{r} 39 \\ - 10 \\ \hline 29 \end{array}$
$\begin{array}{r} 98 \\ - 14 \\ \hline 84 \end{array}$	$\begin{array}{r} 70 \\ - 20 \\ \hline 50 \end{array}$	$\begin{array}{r} 59 \\ - 23 \\ \hline 36 \end{array}$	$\begin{array}{r} 56 \\ - 35 \\ \hline 21 \end{array}$	$\begin{array}{r} 45 \\ - 12 \\ \hline 33 \end{array}$	$\begin{array}{r} 58 \\ - 20 \\ \hline 38 \end{array}$	$\begin{array}{r} 88 \\ - 12 \\ \hline 76 \end{array}$

Resuelve y ordena los resultados de menor a mayor. Escribe en el recuadro de abajo la letra correspondiente y lee el mensaje.

$7 \xrightarrow{+4} 11 \xrightarrow{-8} 3 \xrightarrow{+9} 12 \xrightarrow{-10} 2$ **B**

$16 \xrightarrow{-8} 8 \xrightarrow{+5} 13 \xrightarrow{-7} 6 \xrightarrow{+9} 15$ **N**

$4 \xrightarrow{+8} 12 \xrightarrow{-6} 6 \xrightarrow{+9} 15 \xrightarrow{-5} 10$ **I**

$11 \xrightarrow{-6} 5 \xrightarrow{+9} 14 \xrightarrow{-6} 8 \xrightarrow{+3} 11$ **E**



2	10	11	15
B	I	E	N

NOMBRE: _____

FECHA: _____

- 1) Resuelve empezando por las flechas.
- 2) Suma las cantidades que se indican.



● 1)

→	↓	↓	↓	↓	↓				
→	7	-	1	=	8	+	1	=	9
	-		+		-		+		-
→	2	+	2	=	4	-	1	=	3
	=		=		=		=		=
→	5	-	3	=	2	+	4	=	6
	+		-		+		+		-
→	4	+	2	=	6	-	2	=	4
	=		=		=		=		=
→	9	-	1	=	8	-	6	=	2

● 2)

+ 3

44	→	47
25	→	28
61	→	64
76	→	79

- 5

69	→	64
85	→	80
97	→	92
78	→	73

→	↓	↓	↓	↓	↓				
→	8	-	5	=	3	+	5	=	8
	-		+		+		-		-
→	6	-	1	=	5	-	4	=	1
	=		=		=		=		=
→	2	+	6	=	8	-	1	=	7
	+		-		-		+		+
→	4	+	2	=	6	-	5	=	1
	=		=		=		=		=
→	6	-	4	=	2	+	6	=	8

+ 30

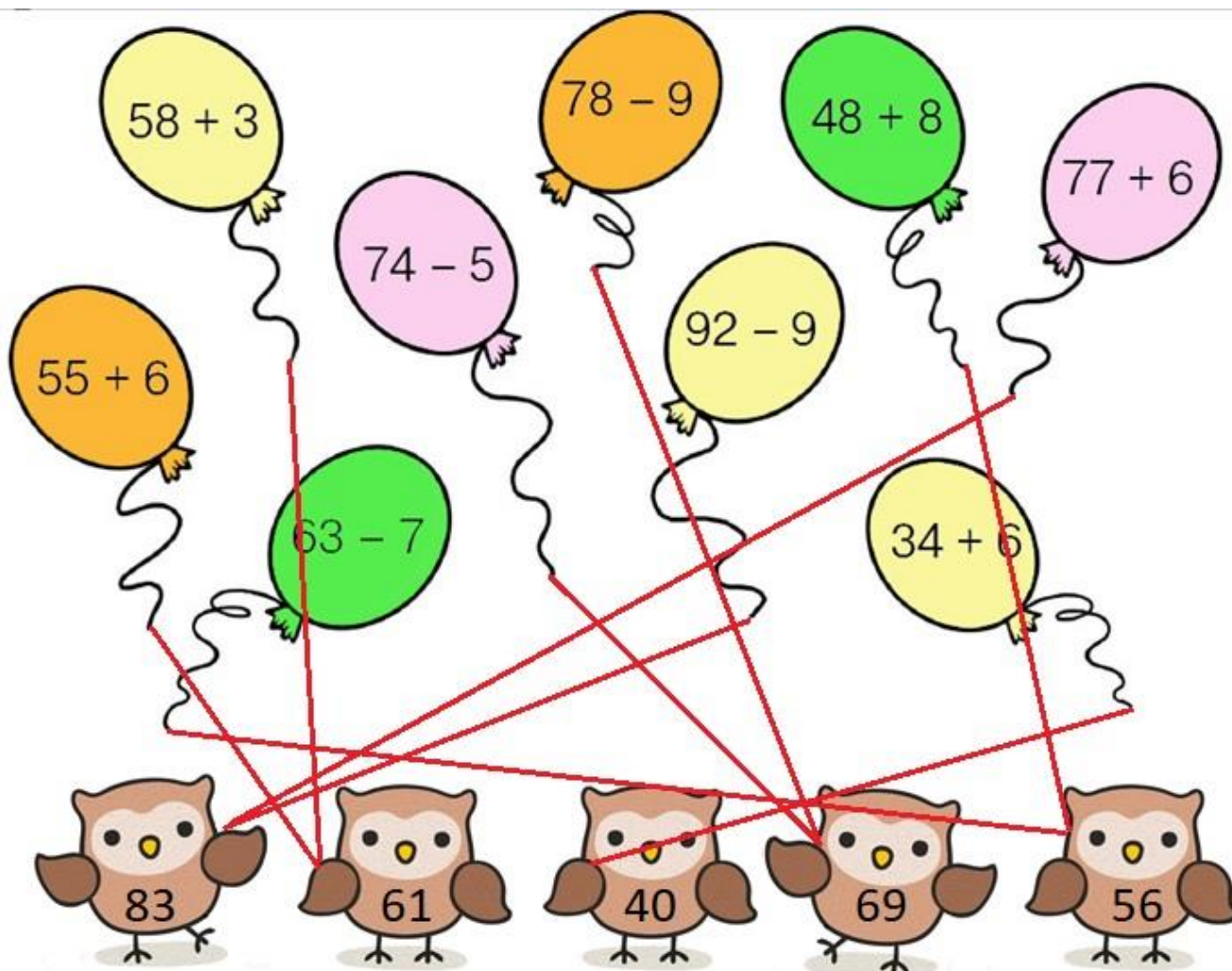
44	→	74
25	→	55
61	→	91
76	→	106

- 50

69	→	19
85	→	35
97	→	47
78	→	28

¿De quién es cada globo?

Relaciona cada operación con su resultado.



Escribe las operaciones.

5	<input type="text" value="+2"/>	▶	7	<input type="text" value="+1"/>	▶	8	<input type="text" value="+2"/>	▶	10	<input type="text" value="+1"/>	▶	11	<input type="text" value="+2"/>	▶	13
12	<input type="text" value="+1"/>	▶	13	<input type="text" value="+2"/>	▶	15	<input type="text" value="+2"/>	▶	17	<input type="text" value="+1"/>	▶	18	<input type="text" value="+2"/>	▶	20
23	<input type="text" value="+5"/>	▶	28	<input type="text" value="+4"/>	▶	32	<input type="text" value="+4"/>	▶	36	<input type="text" value="+5"/>	▶	41	<input type="text" value="+4"/>	▶	45
34	<input type="text" value="+6"/>	▶	40	<input type="text" value="+5"/>	▶	45	<input type="text" value="+6"/>	▶	51	<input type="text" value="+4"/>	▶	55	<input type="text" value="+5"/>	▶	60

NOMBRE: _____

FECHA: _____

En esta tabla existen muchos errores. Pinta de amarillo las casillas erróneas.



$12 - 6 = 6$	$5 + 7 = 11$	$15 - 7 = 8$	$18 - 9 = 8$	$9 + 8 = 17$	$13 - 6 = 8$
$13 - 8 = 6$	$8 + 8 = 16$	$17 - 8 = 8$	$11 - 3 = 8$	$2 + 9 = 10$	$15 - 9 = 6$
$7 + 7 = 14$	$6 + 6 = 13$	$4 + 7 = 11$	$12 - 5 = 6$	$8 + 4 = 12$	$17 - 9 = 9$
$4 + 8 = 11$	$15 - 6 = 8$	$14 - 7 = 8$	$17 - 7 = 9$	$16 - 8 = 9$	$8 + 6 = 13$
$8 + 9 = 18$	$8 + 3 = 10$	$16 - 7 = 9$	$5 + 9 = 14$	$8 + 6 = 13$	$18 - 8 = 9$
$7 + 6 = 12$	$6 + 8 = 14$	$4 + 9 = 14$	$14 - 6 = 7$	$14 - 8 = 6$	$11 - 2 = 7$
$5 + 6 = 11$	$12 - 4 = 7$	$9 + 7 = 17$	$14 - 7 = 6$	$14 - 5 = 8$	$8 + 5 = 13$
$3 + 8 = 12$	$6 + 9 = 15$	$9 + 4 = 15$	$11 - 5 = 7$	$11 - 7 = 4$	$4 + 9 = 16$
$9 + 3 = 13$	$6 + 8 = 13$	$12 - 8 = 4$	$8 + 7 = 15$	$15 - 8 = 6$	$9 + 8 = 18$
$7 + 8 = 14$	$8 + 4 = 11$	$6 + 7 = 14$	$11 - 8 = 4$	$5 + 8 = 15$	$17 - 9 = 6$

Calcula.

$36 + 4 + 2 = \boxed{42}$ $54 - 4 - 6 = \boxed{44}$ $22 + 8 + 1 = \boxed{31}$

$85 + 5 + 7 = \boxed{97}$ $68 - 8 - 3 = \boxed{57}$ $55 - 5 - 9 = \boxed{41}$




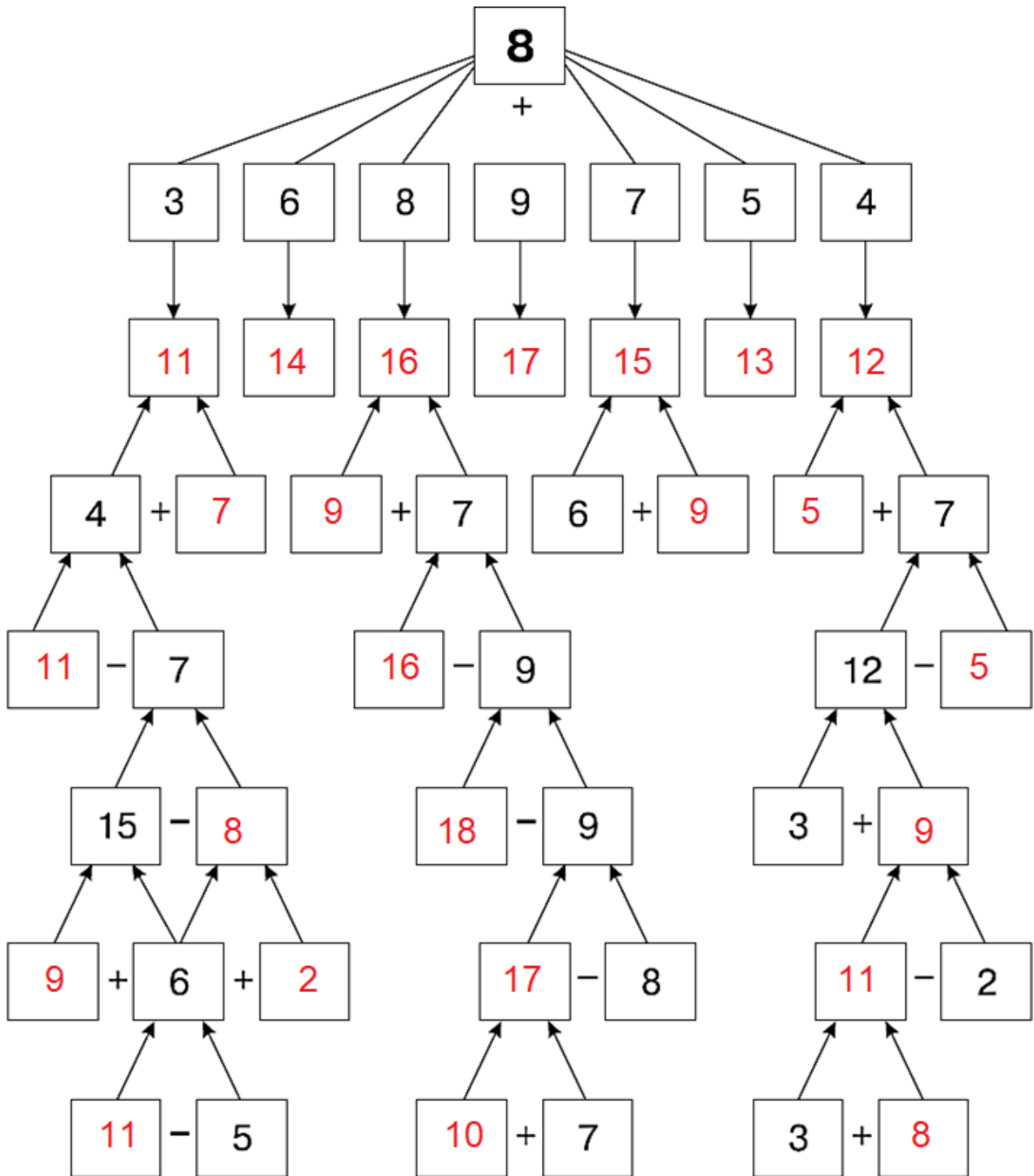
$41 + 9 + 6 = \boxed{56}$ $33 - 3 - 5 = \boxed{25}$ $34 + 6 + 6 = \boxed{46}$

$67 + 7 + 4 = \boxed{78}$ $77 - 7 - 1 = \boxed{69}$ $48 - 8 - 8 = \boxed{32}$

NOMBRE: _____

FECHA: _____

Calcula y escribe los resultados.



NOMBRE: _____

FECHA: _____

Resuelve. Une los resultados que coincidan con su casa correspondiente.

$$\begin{array}{r} - 53 \\ 31 \\ \hline 22 \end{array}$$

$$\begin{array}{r} - 69 \\ 44 \\ \hline 25 \end{array}$$

$$\begin{array}{r} + 21 \\ 17 \\ \hline 38 \end{array}$$

$$\begin{array}{r} - 99 \\ 75 \\ \hline 24 \end{array}$$

$$\begin{array}{r} + 53 \\ 37 \\ \hline 89 \end{array}$$

$$\begin{array}{r} - 78 \\ 62 \\ \hline 16 \end{array}$$

$$\begin{array}{r} - 89 \\ 43 \\ \hline 46 \end{array}$$

$$\begin{array}{r} + 32 \\ 57 \\ \hline 89 \end{array}$$

$$\begin{array}{r} + 10 \\ 80 \\ \hline 90 \end{array}$$

$$\begin{array}{r} - 58 \\ 32 \\ \hline 26 \end{array}$$



Escribe el número que falta.

$35 + \boxed{5} = 40$

$82 - \boxed{2} = 80$

$57 + \boxed{3} = 60$

$42 + \boxed{8} = 50$

$37 - \boxed{7} = 30$

$79 - \boxed{9} = 70$

$66 + \boxed{4} = 70$

$61 - \boxed{1} = 60$

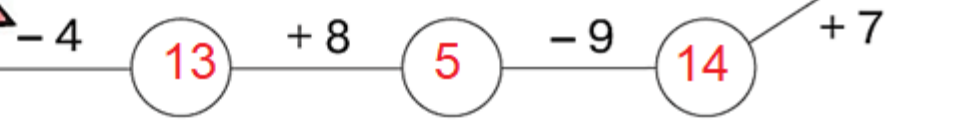
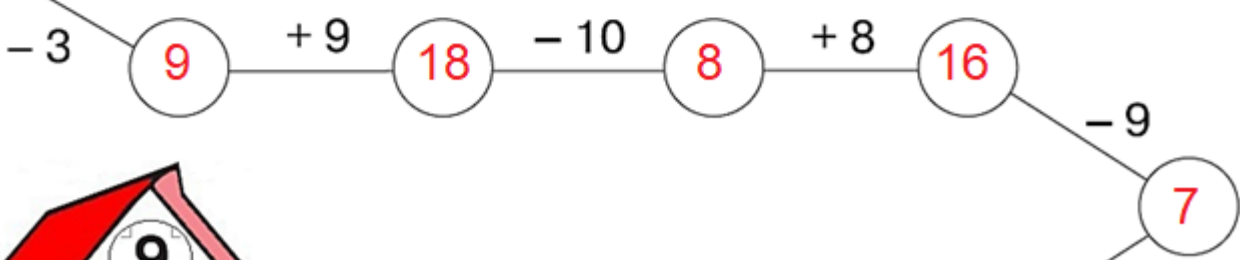
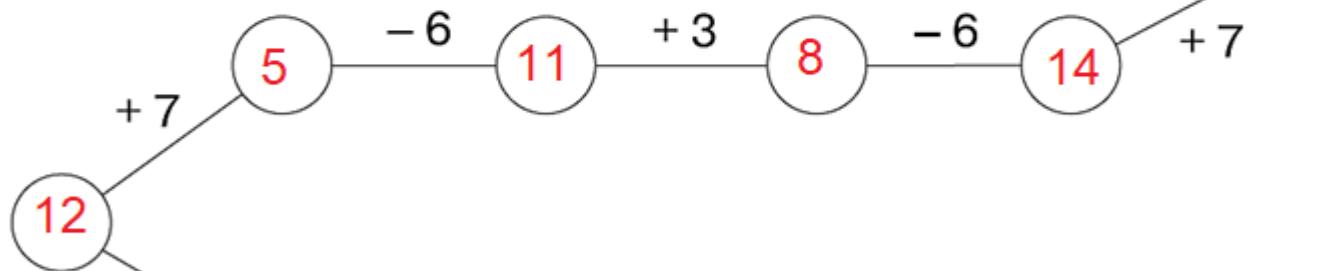
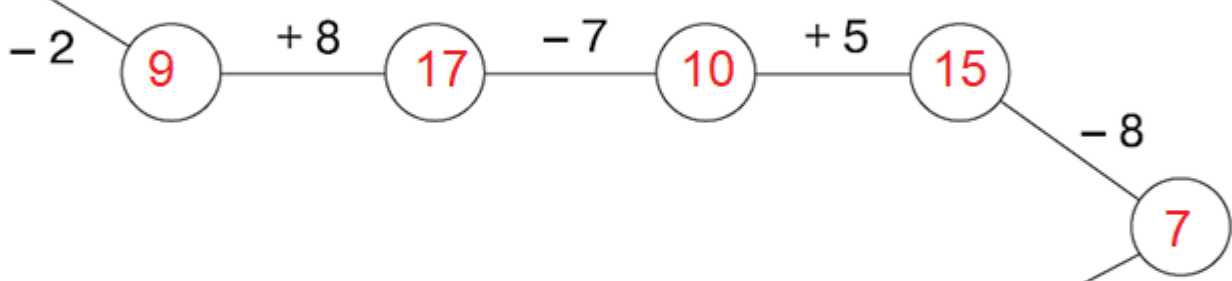
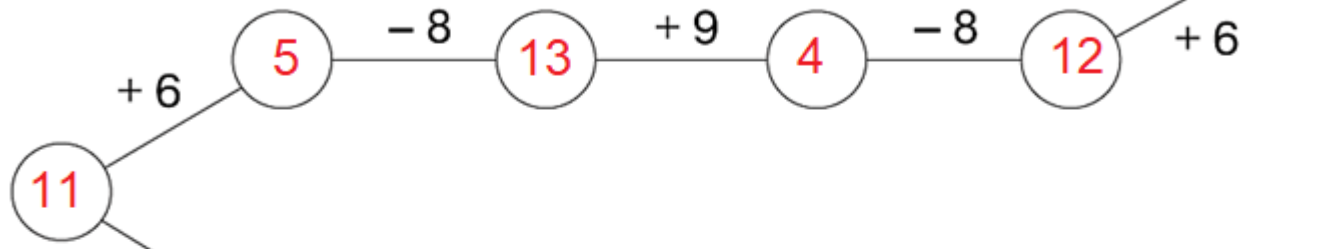
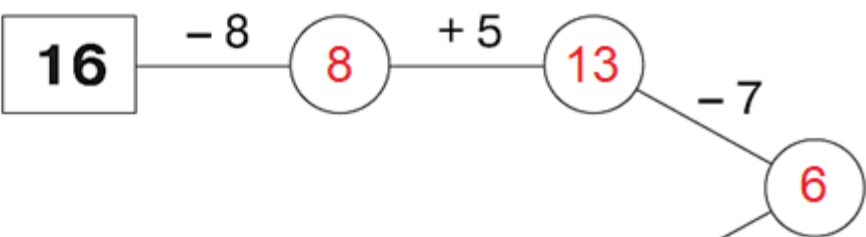
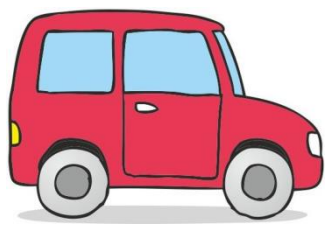
$43 + \boxed{7} = 50$

$24 + \boxed{6} = 30$

$24 - \boxed{4} = 20$

$96 - \boxed{6} = 90$

Realiza las operaciones.



Resuelve.

$38 - 4 = 34$ $43 + 6 = 37$ $92 - 40 = 52$ $51 + 5 = 56$
 $90 - 60 = 30$ $35 + 30 = 65$ $42 - 10 = 32$ $64 + 20 = 84$

Suma.

$$\begin{array}{r} 95 \\ + 31 \\ \hline 126 \end{array}$$

$$\begin{array}{r} 71 \\ + 21 \\ \hline 92 \end{array}$$

$$\begin{array}{r} 47 \\ + 71 \\ \hline 118 \end{array}$$

$$\begin{array}{r} 17 \\ + 61 \\ \hline 78 \end{array}$$

$$\begin{array}{r} 28 \\ + 91 \\ \hline 119 \end{array}$$

Une cada ardilla con su bellota y con el árbol donde vive.

Row 1 (Squirrels):

- Squirrel 1: $9 + 7$
- Squirrel 2: $5 + 9$
- Squirrel 3: $4 + 8$
- Squirrel 4: $6 + 7$
- Squirrel 5: $9 + 2$

Row 2 (Acorns):

- Acorn 1: 13
- Acorn 2: 11
- Acorn 3: 16
- Acorn 4: 12
- Acorn 5: 14

Row 3 (Trees):

- Tree 1: $6 + 5$
- Tree 2: $7 + 7$
- Tree 3: $8 + 8$
- Tree 4: $4 + 9$
- Tree 5: $5 + 7$

Connections (Red Lines):

- Squirrel 1 connects to Acorn 2 (11) and Tree 3 ($8 + 8$).
- Squirrel 2 connects to Acorn 1 (13) and Tree 4 ($4 + 9$).
- Squirrel 3 connects to Acorn 3 (16) and Tree 5 ($5 + 7$).
- Squirrel 4 connects to Acorn 4 (12) and Tree 2 ($7 + 7$).
- Squirrel 5 connects to Acorn 5 (14) and Tree 1 ($6 + 5$).