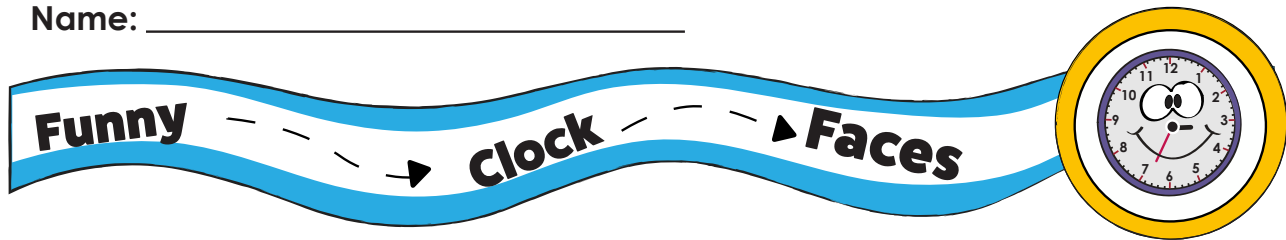


Answer Sheet

Name: _____




Write the time each clock shows on the lines below each clock.


ANSWER SHEET




7:30



8:30



5:30



1:30




3:30



12:30




2:30



6:30



11:30




4:30

Answer Sheet

Name: _____

Measuring

Snakes



Estimate how many inches long you think each snake is from head to tail. Go back to the top of the page and use the ruler to see how close your guesses are! Record your measurement under each snake.

ANSWER SHEET



Estimated Length: _____

Actual length: 6



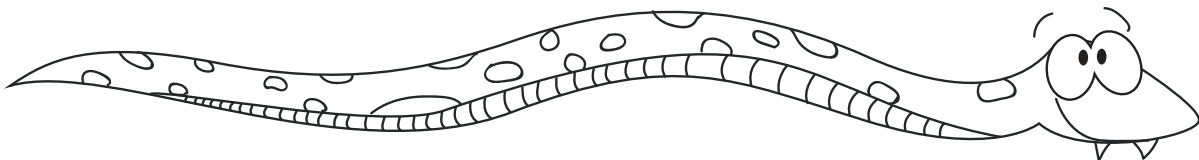
Estimated Length: _____

Actual length: 2



Estimated Length: _____

Actual length: 3.5

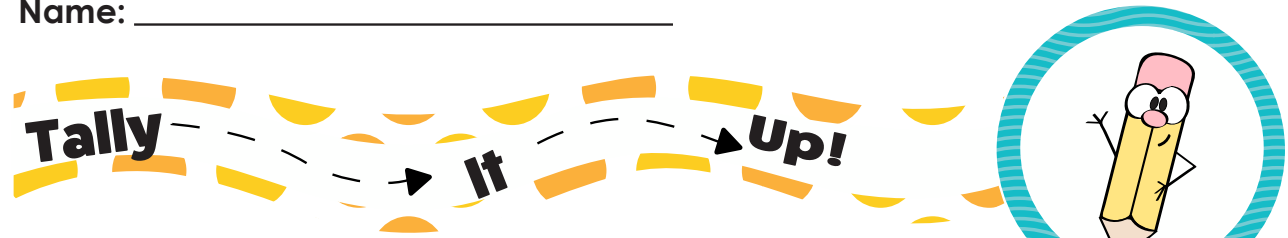


Estimated Length: _____


Actual length: 7

Answer Sheet





Name: _____



Help Ali record how many fruits and vegetables she bought at the grocery store. First, count how many of each type of fruit or vegetable she bought and mark it in the table. Then, write it in number form. Finally, answer the questions.



ANSWER SHEET

Type of food	Tally Marks	Number
 Broccoli		9
 Carrot		6
 Apple		10
 Banana		7

1. What fruit or vegetable does Ali have the most of?

Apples

2. What fruit or vegetable does Ali have the least of?

Carrots

3. How many fruits and vegetables does Ali have in all?

$$10 + 6 + 7 + 9 = 32$$


Answer Sheet

Name: _____

Shape

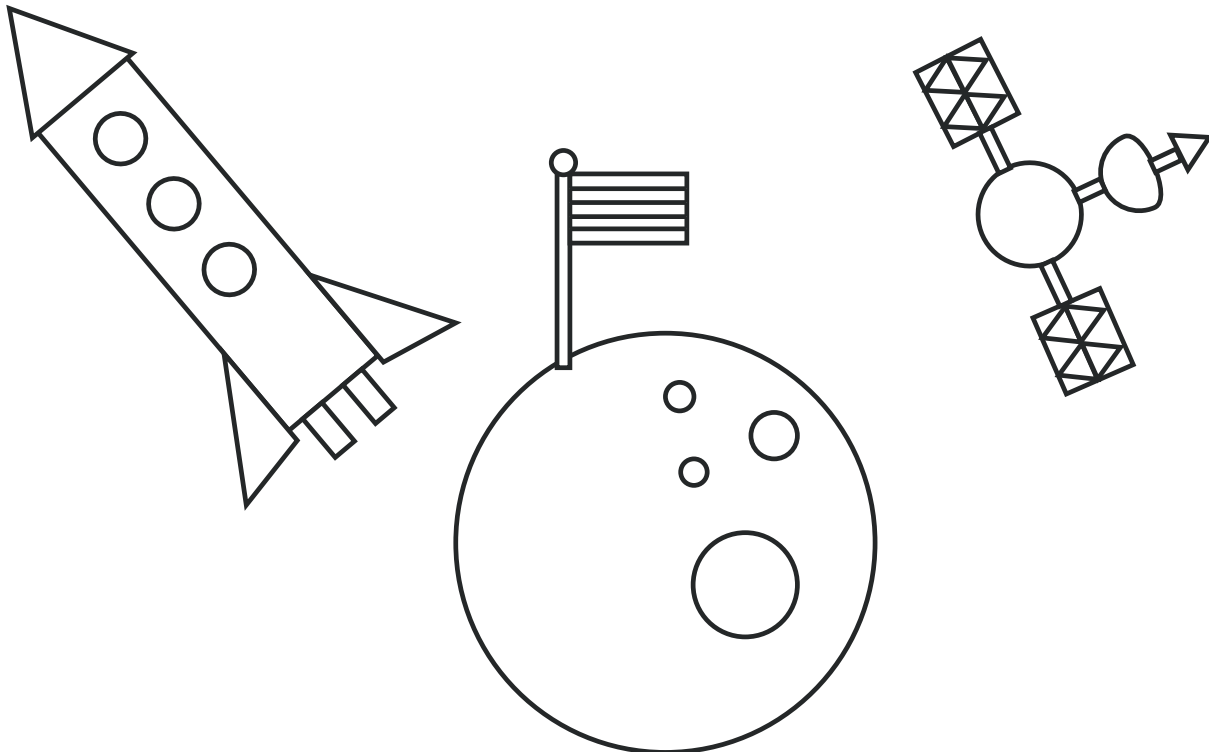
Pictures:

Space Travel



Use the picture to answer the questions below.

Answer Sheet



1. How many rectangles are there?

15

2. How many triangles are there?

12

3. How many circles are there?

8

4. Draw 2 more rectangles and 4 more triangles in the picture.