


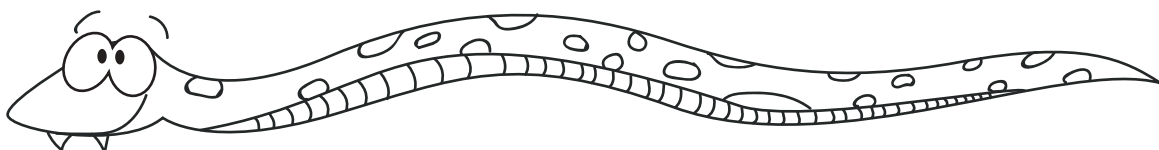
Name: _____

Measuring

Snakes



Estimate how many inches long you think each snake is from head to tail. Go back to the top of the page and use the ruler to see how close your guesses are! Record your measurement under each snake.



Estimated Length: _____

Actual length: _____



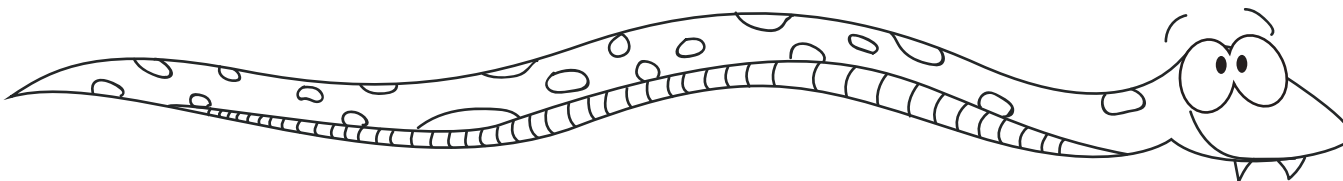
Estimated Length: _____

Actual length: _____



Estimated Length: _____

Actual length: _____




Estimated Length: _____


Actual length: _____





Name: _____

Tally — — — — — **It** — — — — — **Up!**



Help Ali record how many fruits and vegetables she bought at the grocery store. First, count how many of each type of fruit or vegetable she bought and mark it in the table. Then, write it in number form. Finally, answer the questions.



Type of food	Tally Marks	Number
 Broccoli		
 Carrot		
 Apple		
 Banana		

1. What fruit or vegetable does Ali have the most of?

2. What fruit or vegetable does Ali have the least of?


3. How many fruits and vegetables does Ali have in all?

Name: _____


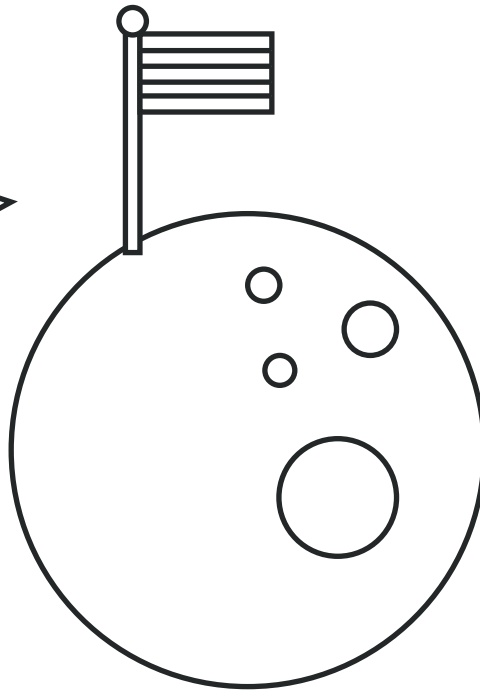

Shape

Pictures:

Space Travel



Use the picture to answer the questions below.



1. How many rectangles are there?

2. How many triangles are there?

3. How many circles are there?

4. Draw 2 more rectangles and 4 more triangles in the picture.

Name: _____



Help the leprechaun find the gold at the end of the rainbow by coloring the spaces with odd numbers to show your path.

4	1	8	22	98	34	10	6	12
14	3	5	7	26	44	62	78	40
50	20	28	9	32	16	90	48	52
12	15	13	11	38	42	56	78	82
12	17	19	21	23	25	27	29	22
20	34	42	68	70	94	46	31	54
56	48	92	24	6	37	35	33	8
18	94	72	46	36	39	34	22	10

