


Nombre:

Fecha:

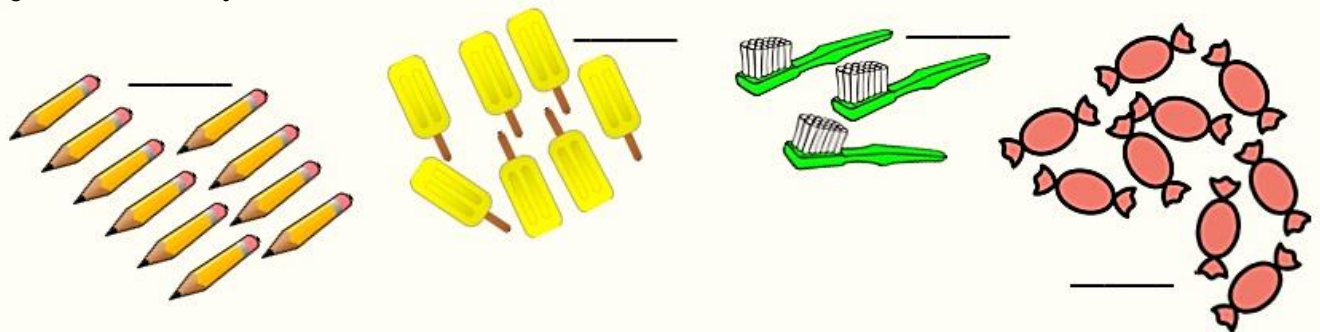
1 Calcula usando los dedos de las manos.

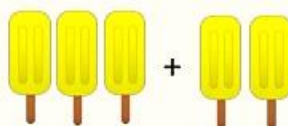



WEBDELMAESTRO.COM

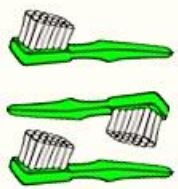
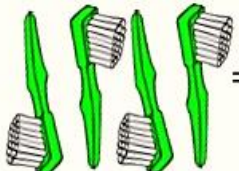
$3 + 2 = \underline{\quad}$	$3 + 6 = \underline{\quad}$	$2 + 6 = \underline{\quad}$	$8 + 2 = \underline{\quad}$
$7 + 1 = \underline{\quad}$	$7 + 3 = \underline{\quad}$	$4 + 2 = \underline{\quad}$	$6 + 3 = \underline{\quad}$
$5 + 5 = \underline{\quad}$	$4 + 4 = \underline{\quad}$	$1 + 8 = \underline{\quad}$	$9 + 1 = \underline{\quad}$


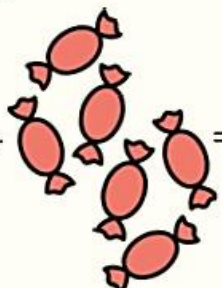
2 ¿Cuántos hay de cada clase?



 +  =

 +  =

 +  =

 +  =