



Nombre:

Fecha:


1 ¿Cuántos hay en cada caso?



= \_\_\_\_\_



= \_\_\_\_\_









= \_\_\_\_\_

Total:



= \_\_\_\_\_




2 Suma según el valor de cada animal.

|   |  |  |   |  |  |
|---|--|--|---|--|--|
|  |   |   |   |   |   |
| 1   | 2  | 3  | 4   | 5  | 6  |
|  |  |  |  |  |  |
| 7   | 8  | 9  | 10  | 11   | 12   |




WEBDELMAESTRO.COM

 +  +  = \_\_\_\_\_




 +  = \_\_\_\_\_

 +  +  = \_\_\_\_\_




 +  = \_\_\_\_\_

 +  +  = \_\_\_\_\_




 +  = \_\_\_\_\_



 +  +  = \_\_\_\_\_

 +  = \_\_\_\_\_

 +  +  = \_\_\_\_\_

 +  = \_\_\_\_\_

 +  +  = \_\_\_\_\_

 +  = \_\_\_\_\_