



Nombre:

Fecha:


1 ¿Cuántos hay en cada caso?



= \_\_\_\_\_



= \_\_\_\_\_

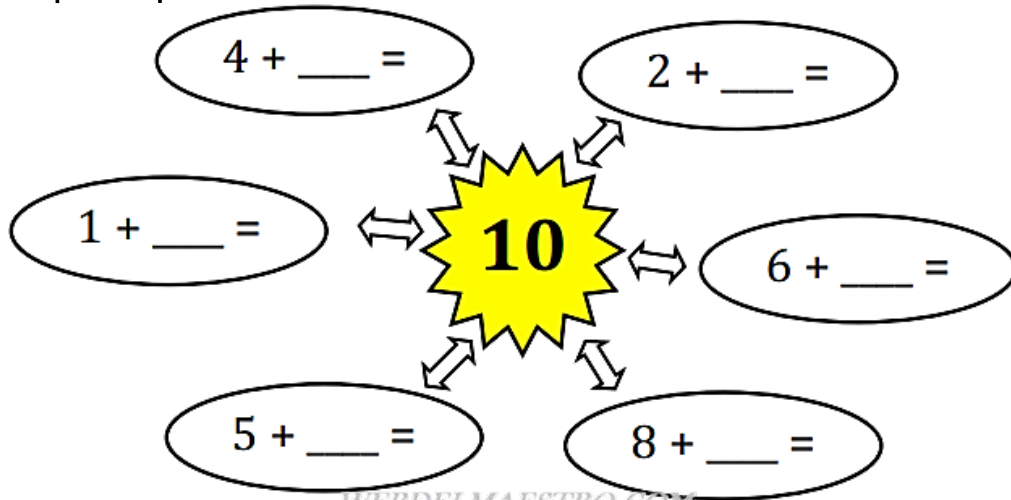


= \_\_\_\_\_

Total:

= \_\_\_\_\_

2 Completa para que sumen 10.



WEBDELMAESTRO.COM

3 Suma los números.

$5 + 6 = \underline{\quad}$

$9 + 4 = \underline{\quad}$

$2 + 8 = \underline{\quad}$

$3 + 7 = \underline{\quad}$

$3 + 8 = \underline{\quad}$

$5 + 5 = \underline{\quad}$

$3 + 10 = \underline{\quad}$

$3 + 9 = \underline{\quad}$

$11 + 2 = \underline{\quad}$

$3 + 3 = \underline{\quad}$

$4 + 6 = \underline{\quad}$

$5 + 7 = \underline{\quad}$

4 Completa para que sumen 12.

