



Nombre:

Fecha:

¿Cuántos hay? Completa los números, dibuja y calcula.



+



=



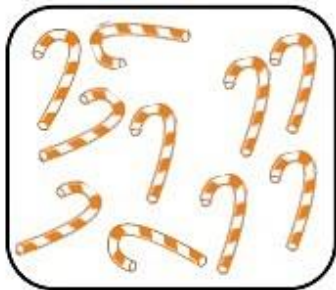
—

+

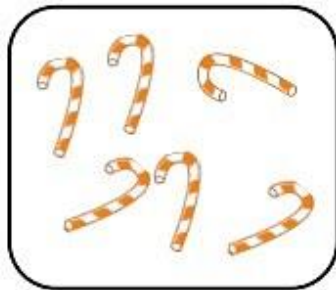
—

=

—



+



=



—

+

—

=

—



+



=



—

+

—

=

—



+



=



—

+

—

=

—