

Nombre:

Fecha:

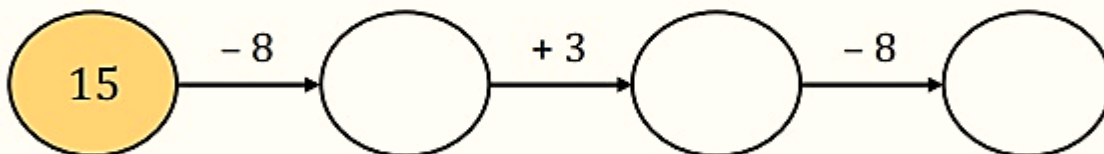
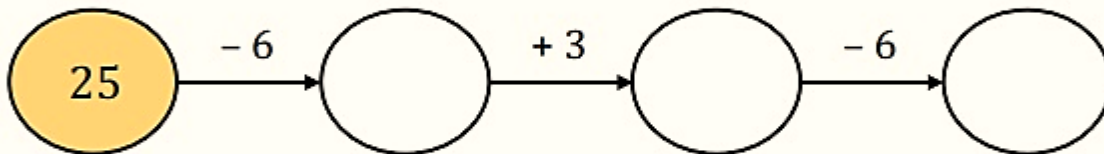
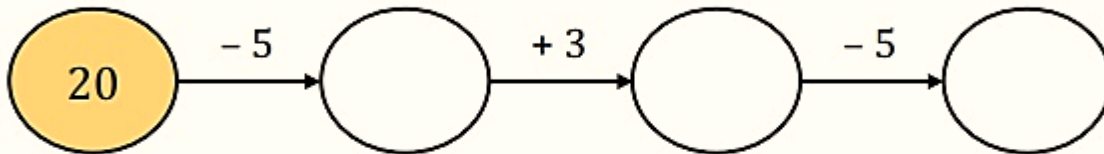
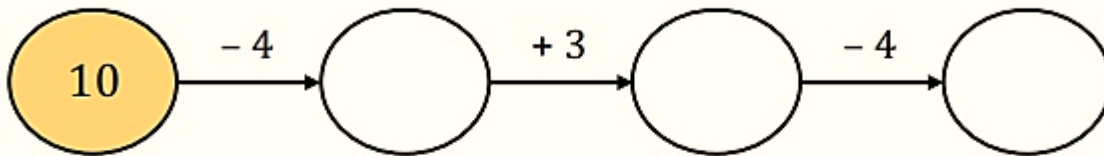
1 Realiza las restas.

$20 - 12 = \underline{\quad\quad}$ $20 - 17 = \underline{\quad\quad}$


$20 - 15 = \underline{\quad\quad}$ $20 - 14 = \underline{\quad\quad}$ $20 - 19 = \underline{\quad\quad}$

$20 - 11 = \underline{\quad\quad}$ $20 - 16 = \underline{\quad\quad}$ $20 - 13 = \underline{\quad\quad}$

2 Resuelve las operaciones.



3 Ordena los resultados de menor a mayor.



5				
---	--	--	--	--