

Nombre: _____

Fecha: _____

Completa.

$6 \times \square = 18$

$7 \times \square = 7$


$4 \times \square = 20$

$8 \times \square = 16$

$9 \times \square = 81$

$3 \times \square = 12$

$5 \times \square = 45$



Multiplica.

$$\begin{array}{r} 9 \\ \times 4 \\ \hline \square \end{array}$$

$$\begin{array}{r} 3 \\ \times 6 \\ \hline \square \end{array}$$

$$\begin{array}{r} 2 \\ \times 7 \\ \hline \square \end{array}$$

$$\begin{array}{r} 4 \\ \times 6 \\ \hline \square \end{array}$$

$$\begin{array}{r} 8 \\ \times 8 \\ \hline \square \end{array}$$

$$\begin{array}{r} 8 \\ \times 6 \\ \hline \square \end{array}$$

$$\begin{array}{r} 9 \\ \times 4 \\ \hline \square \end{array}$$

$$\begin{array}{r} 5 \\ \times 7 \\ \hline \square \end{array}$$

$$\begin{array}{r} 6 \\ \times 2 \\ \hline \square \end{array}$$

$$\begin{array}{r} 2 \\ \times 0 \\ \hline \square \end{array}$$

$$\begin{array}{r} 7 \\ \times 4 \\ \hline \square \end{array}$$

$$\begin{array}{r} 3 \\ \times 3 \\ \hline \square \end{array}$$

$$\begin{array}{r} 4 \\ \times 5 \\ \hline \square \end{array}$$

$$\begin{array}{r} 7 \\ \times 8 \\ \hline \square \end{array}$$

Escribe estas sumas en forma de multiplicación.


$5 + 5 + 5 + 5 \leftarrow \text{-----} \rightarrow \square \times \square$

$4 + 4 + 4 \leftarrow \text{-----} \rightarrow \square \times \square$

$8 + 8 \leftarrow \text{-----} \rightarrow \square \times \square$

$1 + 1 + 1 + 1 + 1 + 1 + 1 \leftarrow \text{---} \rightarrow \square \times \square$

$7 + 7 + 7 + 7 + 7 \leftarrow \text{-----} \rightarrow \square \times \square$



Nombre

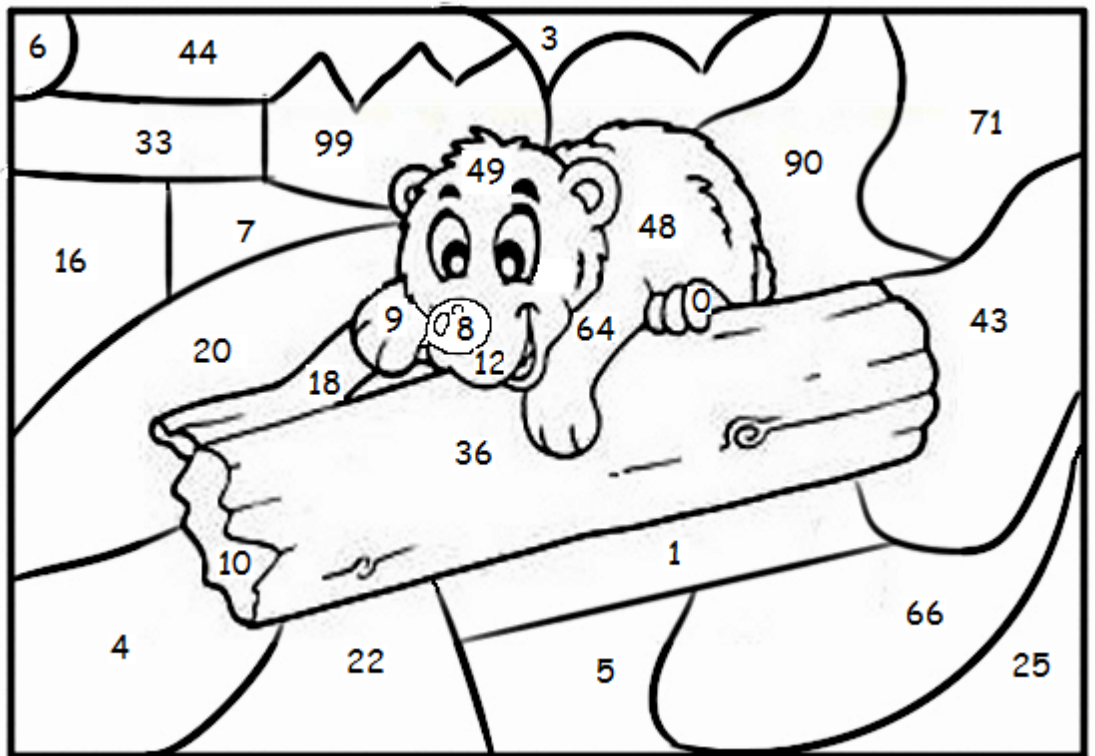
Fecha

Multiplica.

6	7	1	2	3	5	4
$\times 8$	$\times 7$	$\times 9$	$\times 6$	$\times 4$	$\times 2$	$\times 4$
<input type="text"/>	<input type="text"/>	<input type="text"/>	<input type="text"/>	<input type="text"/>	<input type="text"/>	<input type="text"/>

6	7	8	6	9	4	2
$\times 3$	$\times 0$	$\times 8$	$\times 2$	$\times 4$	$\times 3$	$\times 6$
<input type="text"/>	<input type="text"/>	<input type="text"/>	<input type="text"/>	<input type="text"/>	<input type="text"/>	<input type="text"/>

Busca en el dibujo los productos que has obtenido y coloréalos



Completa.

$$6 \times 2 = 6 + \square = 12$$

$$7 \times \square = 7 + 7 + 7 + 7 + 7 = \square$$

$$2 \times 8 = \square + 2 + \square + \square + \square + \square + \square + \square = \square$$

$$5 + 5 + 5 + 5 + 5 + 5 = 5 \times \square$$