



Nombre:

Fecha:


1 ¿Cuántos hay?



= _____



= _____



= _____

2 Suma los números.

$3 + 6 = \underline{\quad}$

$13 + 6 = \underline{\quad}$

$10 + 20 = \underline{\quad}$

$7 + 2 = \underline{\quad}$

$11 + 7 = \underline{\quad}$

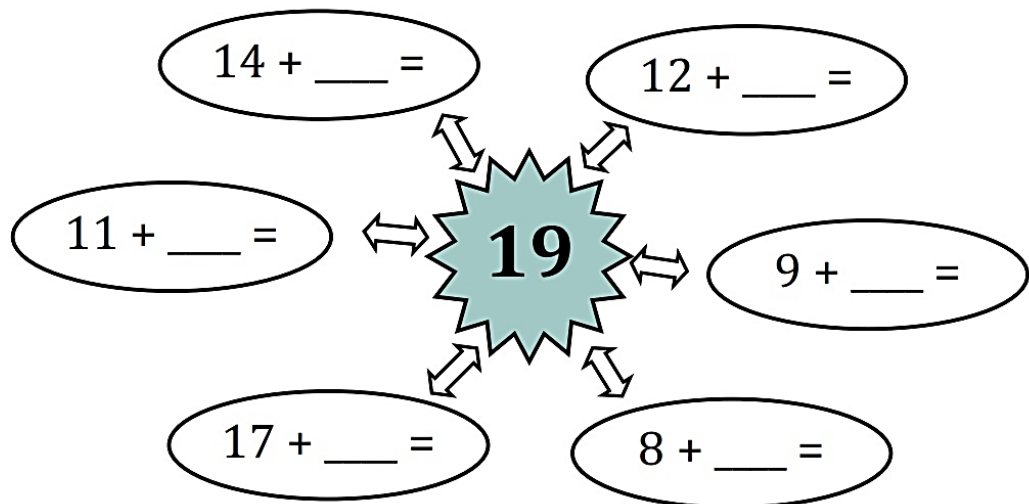
$30 + 20 = \underline{\quad}$

$5 + 3 = \underline{\quad}$

$14 + 6 = \underline{\quad}$

$40 + 30 = \underline{\quad}$

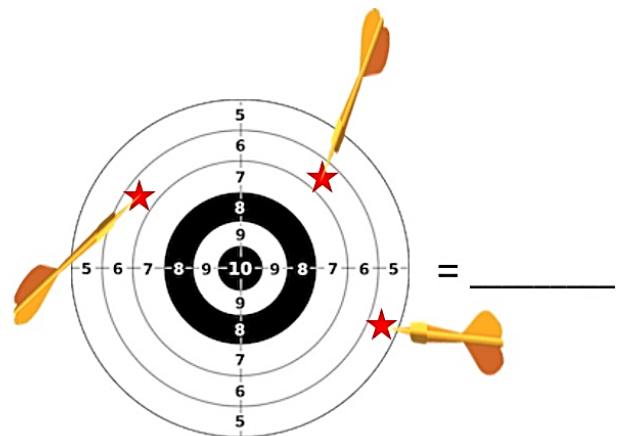
3 Completa para obtener 19.



4 ¿Cuántos puntos ha conseguido?



= _____



= _____