

Nombre:

Fecha:

1 Escribe el número anterior y posterior.

	4	
--	---	--

	8	
--	---	--

	12	
--	----	--

	17	
--	----	--

	23	
--	----	--

	29	
--	----	--

	41	
--	----	--


	50	
--	----	--

	32	
--	----	--

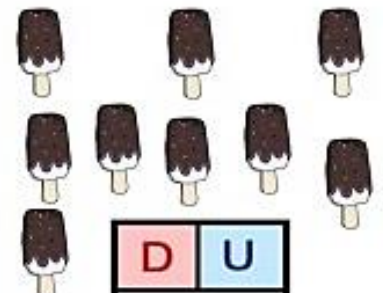
2 ¿Cuántos hay?.




D	U



D	U



D	U



D	U

3 Continúa las series.

0	1				5		7	8			11	
---	---	--	--	--	---	--	---	---	--	--	----	--

	10				14		16	17			20	
--	----	--	--	--	----	--	----	----	--	--	----	--