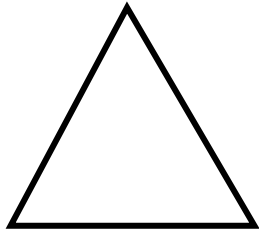



FIGURAS GEOMÉTRICAS PLANAS



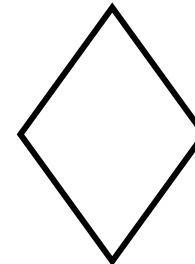
TRIÁNGULO



CUADRADO



RECTÁNGULO



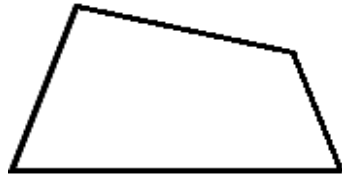
ROMBO



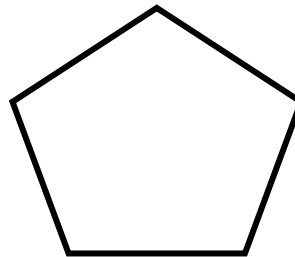
ROMBOIDE



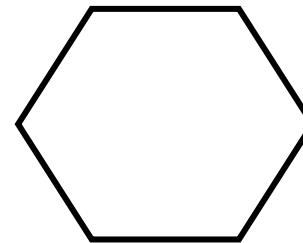
TRAPECIO



TRAPEZOIDE



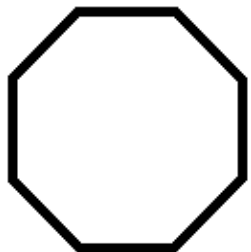
PENTÁGONO



HEXÁGONO



HEPTÁGONO




OCTÓGONO




ENEÁGONO



DECÁGONO



CIRCUNFERENCIA



CÍRCULO

Escribe el número de lados y colorea todas las figuras menos la circunferencia.