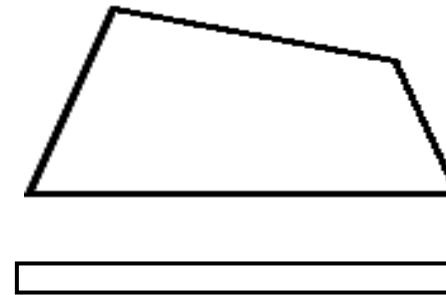
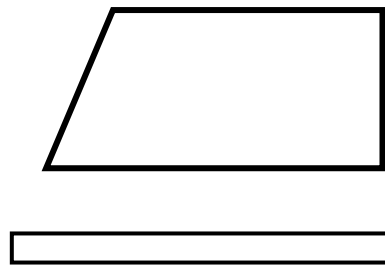
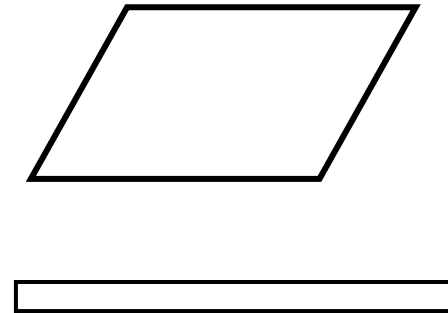
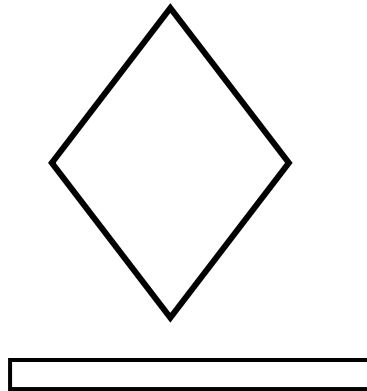

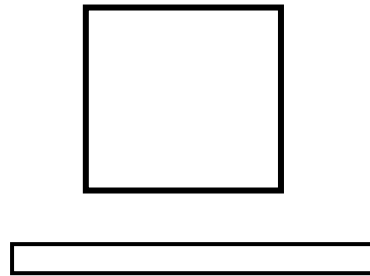


W
O
R
M
E
H
A
F
-
R
D
A
C
Q

4
L
A
D
O
S
Y
4
Á
N
G
U
L
O
S

PARALELOGRAMOS
(Lados paralelos dos a dos)

NO PARALELOGRAMOS



Escribe el nombre de cada figura geométrica y colorea.